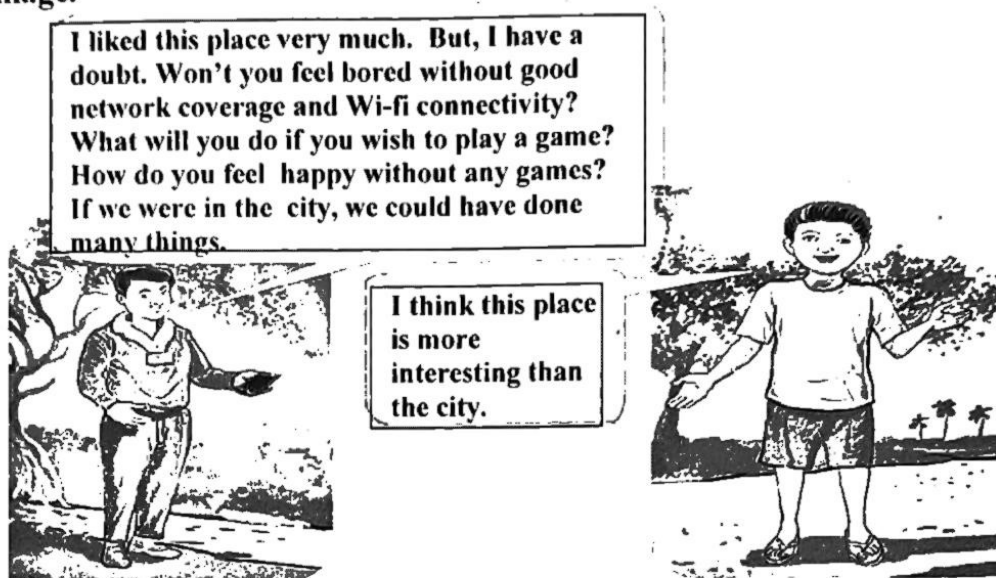


**Instructions**

- 15 minutes is allotted as cool-off time to read and understand the questions and plan answers.
- You must answer all the 6 questions and answer all the sub questions.

The first question has two parts 1(A) and 1(B). Attend either 1(A) OR 1(B) completely.


1(A) Read the conversation between Appu and Vicky, during their visit to Peeli's village.



- There are people who like village life and those who like city life. Prepare a note on the peculiarities of village life and city life.
- Which of the following is not a peculiarity of Peeli's village?
 - Villagers buy and sell the locally produced goods in weekly markets.
 - There are many ponds to practise swimming.
 - Bull surfing competitions are held in ploughed fields.
 - Quick transportation facilities to reach different places.

OR

1 (B)



How happy I
am to see them
enjoy.

- a) We are familiar with children with special needs like Meenu. People have different experiences of happiness in life. Prepare a note sharing the moments of happiness you have experienced in your family, school and society.
- b) Which of the following is not a happy experience for the children from Peeli's village?
- A) Everyone lives together in unity B) It has beautiful landscape
C) Vast playground D) Facilities like internet and Wi-fi connectivity
- 2 The mastery of using fire in a controlled manner and the beginning of agriculture are the two important milestones in the progress of early humans.



- a) Write a note on the changes that were brought in the food habits of early humans from the use of fire.
- b) Early humans settled near agricultural fields. Which of the following is not a result of this.
- A) They could protect the agricultural fields. B) They wandered in search of food.
C) Availability of food items increased. D) Got more time for rest.
- 3 **Observe the headings**

Kottayam becomes the first district without extreme poverty.

Plans to make Kerala a state without extreme poverty is nearing the goal.

- a) List and tabulate the ideas to be presented in a speech at school on the topic 'Reasons and Remedies for Poverty and Starvation'.

b) Which day is observed as 'World Food Day'?

- A) October 31 B) October 2 C) October 16 D) October 24

4 Read the news report (ii)

Adithyan Rajesh, the youngest Malayali IT entrepreneur in India

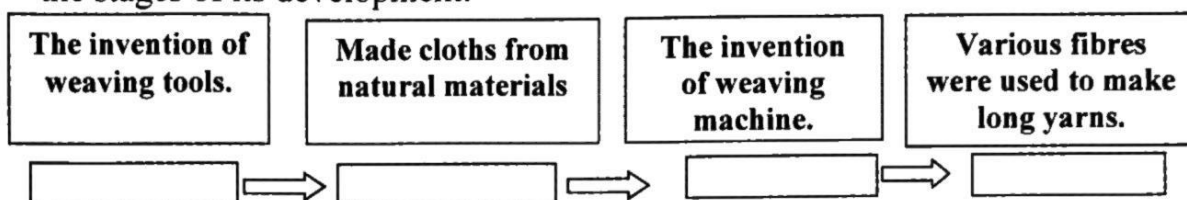
Adithyan Rajesh, born in Thiruvalla, Kerala is the youngest IT entrepreneur in India. The company of Adithyan Rajesh offers a variety of services including Aptoide instead of Android, mobile games, web designing, etc.

- a) If you get a chance to meet Adithyan Rajesh, the youngest IT entrepreneur, what would you ask? Prepare the questionnaire.
- b) Which of the following is not a characteristic of self-employment?
- A) Individuals manage their enterprise on their own.
B) Self-employed entrepreneurs are the sole beneficiaries of their employment.
C) A self-employer has no duties of an employee.
D) The owner of the self-employed enterprise is the owner of that enterprise.

Question 5 has two parts 5(A), 5(B). Attend either 5(A), 5(B) completely.

5(A)

- a) The history of cloth manufacturing is given below. Arrange them according to the stages of its development.



- b) Find the correct statements from the following, regarding the history of cloth manufacturing.
1. Rayon is the natural fibre used for clothing.
 2. Indians travelled to different parts of the world in search of markets to sell their surplus textiles.
 3. Artificial dyes were used to colour clothes.
 4. The invention of spinning jenny brought major changes in the field of textile production.
- A) 1 and 2 are correct B) 2 and 3 are correct
C) 3 and 4 are correct D) 1 and 4 are correct

OR

5 (B) Observe the table prepared by the students who visited the cloth manufacturing factory to know more about it.

Fibres

Polyester, Nylon, Silk, Wool, Jute, Rayon, Cotton, Modal

a) Arrange the different types of fibres suitably.

Natural fibres	Artificial fibres
Jute	Modal

b) The use of machines brought major changes in the field of cloth manufacturing. Find out the correct statements related to this.

1. Increase in the production

2. More workload

3. Cloth manufacturing using only natural dyes

4. Production of quality clothes.

A) 1 and 2 are correct

B) 1 and 4 are correct

C) 2 and 4 are correct

D) 3 and 4 are correct

6 Observe the cartoon given below.

I am a farmer. I have a building from which I earn money.

I work as a security officer in a bank. I also have an agricultural land of 50 cents.



a) Have you observed the sources of income of these two people? Complete the table by finding out the different sources of income.

Interest
Salary
Rent
Profit Share/ Dividend
Crop

Source	Income
Agricultural employment	1.....
Building	2.....
Security Job	3.....
Agriculture	Crop

b) Classify the following sources of income as assets and employment.

(Buildings, Agriculture, Deposits, Business, Assets, Teaching)

Assets	Employment
Buildings	Employment
•	•
•	•