



**SAMAGRA SHIKSHA KERALA**  
**First Term Evaluation 2024 - 2025**



Standard : III

**MATHEMATICS**

Time : 2 Hrs

Name of Student.....

Name of School .....

Division .....

Signature of Parent .....

Signature of Teacher .....

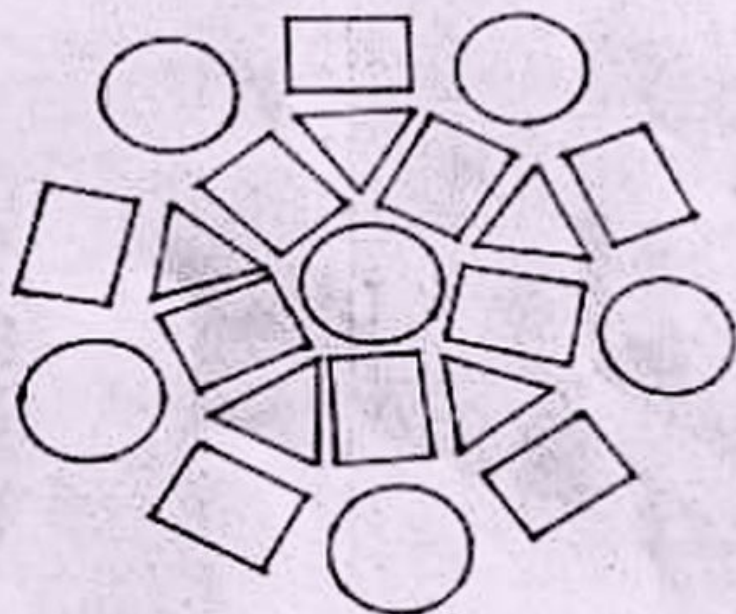
Sl No	Activities	Grade
1	Pookkalam	
2	Sports Meet	
3	School Bazaar	
4	Abacus	
5	Nirayunna Kanakkupetti	
6	World Cup Cricket	
Overall Grade		

**Instructions**

- First 15 minutes should be used for reading and comprehending the activities.
- Out of the six activities, answer any five.
- All the sub activities of the selected activities should be answered.

**Activity - 1 Pookkalam**

Teacher asked third standard students to make a design for pookkalam in connection with the Onam celebration. The design by Amina is given






a)  blue,  red,  green.


Make the design beautiful giving these colours.



b) Identify the shapes in the picture and write their names and numbers.



c) Draw a picture using the shapes that you have identified.



### Activity - 2 Sports Meet



Chest Numbers from 100 to 244 were given to the athletes who participated in Rajamalli Government UP school sports meet.

a) Write the number of total students who participated in sports meet.

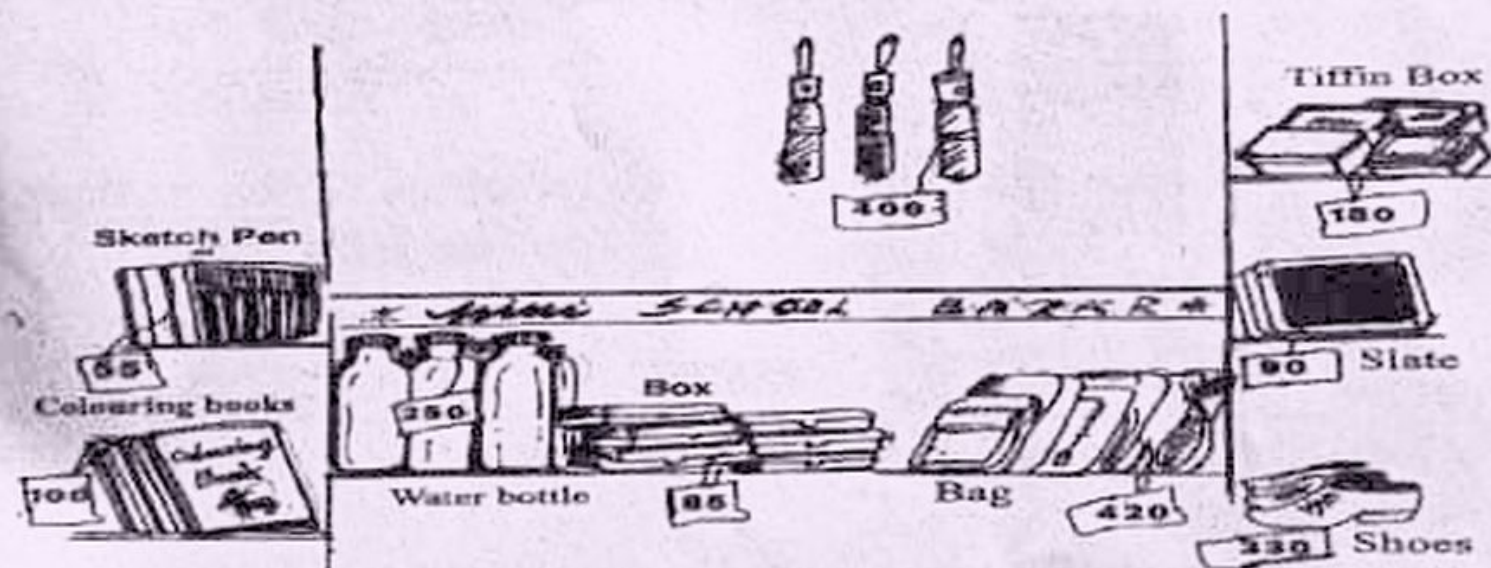


- b) Chest numbers from 100 to 155 were given to the LP students. How many LP students participated in the competition?

- c) In the marchpast, students having the chest numbers from 101 to 109 stood in the correct order in the first line. Write the chest number of the fifth student in the line?

- d) Rs.685/- was spent to give the medals to the winners of contests and Rs.284/- was spent to prepare the chest numbers. Write the total amount spent?

### Activity - 3 School Bazaar



- a) Vidya bought things worth Rupees 815 from the School Bazaar. At first, she bought an umbrella and a box. Name the thing she bought for the balance money?

- b) If one has to buy the most expensive item and the cheapest item from the School Bazaar, how much will need in total?



- c) How much will be needed to buy a colouring book, sketch pen and a box.  
Put a tick mark (✓) against the right answer.

• 225 ☐



• 240 ☐

• 245 ☐

• 230 ☐

#### Activity - 4 Abacus

Akhila and Fasal, studying in class three are making digits using abacus. The digits they made using 23 beads are given below in the abacus.



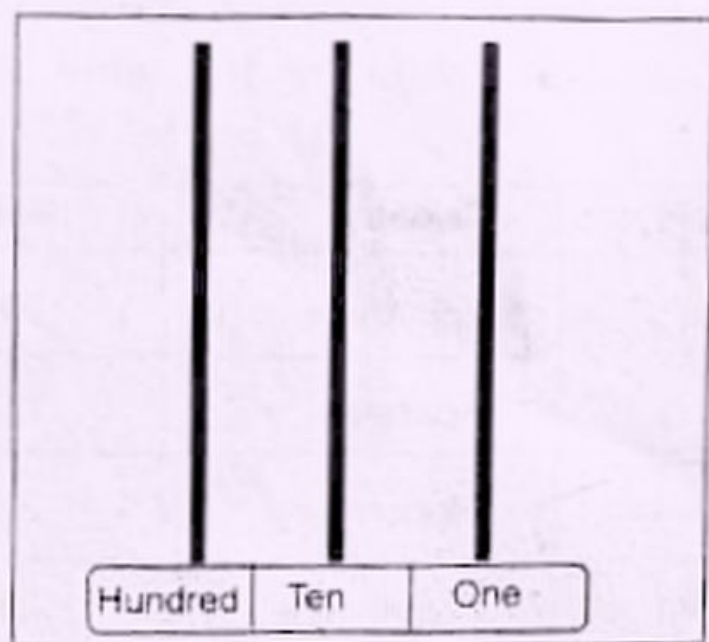
- a) Write the number arranged by Akhila in the abacus.

- a) Write the number arranged by Fasal in the abacus.

- b) If Akhila changed a bead from ones position to the 100<sup>th</sup> position, what will be the number?

- c) In the second round, if Fasal rearranged a bead from the 10<sup>th</sup> position to the 100<sup>th</sup>. What will be the number?

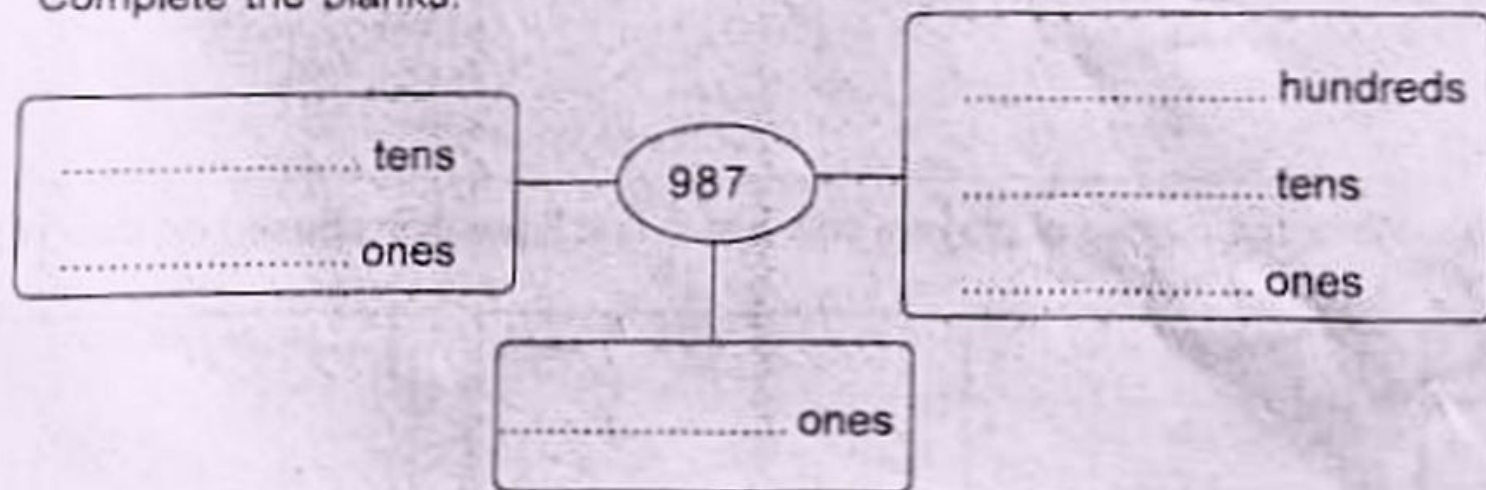
- d) Draw the largest 3 digit number in abacus that can be made with the 23 beads.



**Activity - 5 Nirayunna Kanakkupetti**

There are thousand eerkil sticks in Rahul's mathematical box. It is kept in the box in bundles of 100 each. There were only 850 sticks left in the box when Saju and Biju arranged them after a mathematical game.

- a) How many more are needed to make it 1000.
- b) How many bundles will be there if 850 sticks are arranged as bundles of 10?
- c) Complete the pattern.  
150, 300, 450, .....
- c) Complete the blanks.





### Activity - 6 World Cup Cricket

The table given below is the details of players who won maximum runs in the Twenty Twenty World cup match. Analyse the table and answer the questions.

Name of the players	Country	Runs
De cock	South Africa	243
T.M Head	Australia	255
Rahmanulla Gurbas	Afghanistan	281
Ibrahim Sadran	Afghanistan	231
Rohit Sharma	India	257

- a) Name the player who won maximum runs? How many runs?

- b) Write the position of Indian player Rohit Sharma on the basis of runs scored?

- c) How many runs did both the Afghanistan players score?

- d) Write the names of players who are in first 3 positions based on their runs.