

# ***SUMMATIVE ASSESSMENT - I 2025-2026***

## ***MODEL QUESTION PAPER SOCIAL SCIENCE***

*Class : 6*

*Time : 2 Hrs 15 minutes*


### **INSTRUCTIONS**

1. 15 minutes cool off time is allotted for reading and understanding the questions.
2. Answer all the 6 questions. Answer all the sub questions in it.
3. For questions with internal choice, answer either **A or B**.

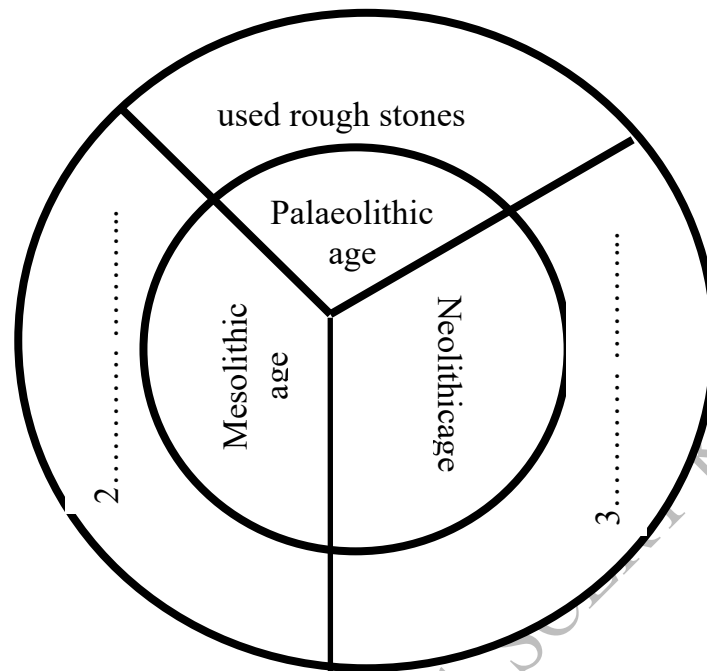
**(1)** Observe the pictures.



Used rough stones



a) Complete the given diagram related to stone age.



b) Beginning of agriculture transformed human life. Justify the statement.

(2)

a) The characteristics of human species in Homo group are listed. Write the names of the human species from the given hints.

|                          |         |
|--------------------------|---------|
| The wise or thinking man | 1. .... |
| Tool makers              | 2. .... |
| The upright humans       | 3. .... |

b) Write the correct statement related to human evolution.

- A. Human evolution began from primates, a category of mammals.
- B. Hominoids evolved from Hominids.
- C. Australopithecus is the sub group of Homo.
- D. Homo habilis is a group of modern man.

c) In which book did Charles Darwin present the theory of human evolution?

- A. The power of movement in plants.
- B. On the origin of species.
- C. The life on the Earth.

**D. Origin of Life.**

**(3)**

**a)** Match the following suitably.

|   |             |
|---|-------------|
| The land area, the water bodies, the air space and the coastal areas of a country that come under the jurisdiction of state formation | Population  |
| The supreme power of the state to take decisions without being subjected to external interventions or pressure                        | Government  |
| An agency to form and express policies of the state.  | Sovereignty |
| People stay together with mutual dependence, common interests and collective consciousness  | Territory   |

**b)** Which among the following doesn't belong to the peculiarities of a government?

- A.** Component of the state.
- B.** Administrators and officials are included in this.
- C.** It is a permanent institution.
- D.** Sovereignty is executed through this agency.

**(4)**

**a)** Fill the blanks with suitable headlines.

- The Kerala Revenue Recovery Bill has been passed by the Assembly.
- Officials have been assigned to execute the ban over the one time used plastic products.
- The Parliament does not have the power to annul the court verdicts-  
Supreme Court

Legislature . . . . .

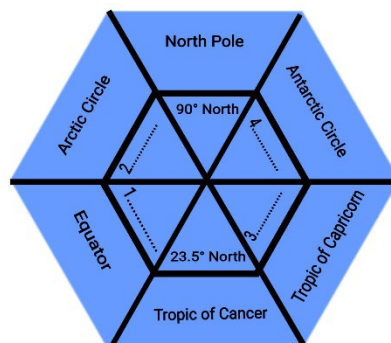
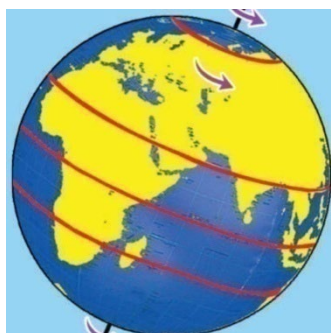
Executive . . . . .

Judiciary . . . . .

**b)** Write a note on any one organ of a government.

(5.A)

a) Observe the picture and complete the concept map.



b) Write the name of the continent that belongs only in southern hemisphere from the options.

- A. Australia
- B. Africa
- C. Europe
- D. Asia

OR

(5.B)

a) Classify the given concepts related to globe.

|   |                         |
|---|-------------------------|
| An imaginary line drawn connecting the North Pole and the South Pole with reference to Earth's surface. | International Date line |
| The latitude at $90^{\circ}$ South from the equator   | Graticule               |
| The longitude that passes through $180^{\circ}$   | Southern Hemisphere     |
| The name given to the network of lines of latitude and longitude  | Northern Hemisphere     |
|   | South Pole              |
|   | Longitudes              |

**b)** Find out the correct statement

- A.** The circles of latitudes become bigger in size as we move from the equator towards the poles.
- B.** Latitudes in the south of the equator are called Northern Latitudes.
- C.** All the lines of longitudes are not of the same size.
- D.** If longitudinal lines are drawn at  $1^0$  interval connecting both poles, we can draw 360 longitudinal lines.

**(6.A)**

The initial form of democracy was originated the Greek city state of Athens.

- a)** What were the characteristics of democracy during that period?
- b)** How was the political body of Athens known?
  - A.** Village Parishad
  - B.** Assembly
  - C.** Council
  - D.** Parliament
- c)** There were practical difficulties in bringing Greece under a uniform administrative system. What were the reasons?

**OR**

**(6.B)**

It was during the reign of Augustus that the Roman Republic transitioned completely into Roman empire.

- a)** What were the features of Roman Empire?