

Total Score : 80

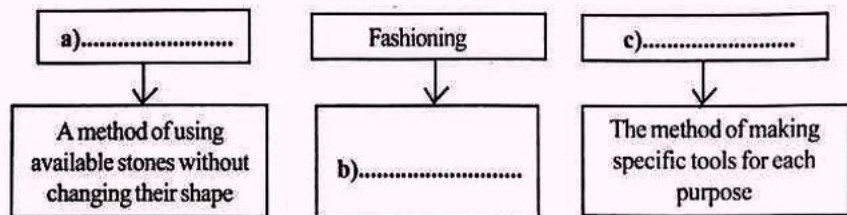
Instructions

- ◆ Fifteen minutes is cool off time.
- ◆ Read the questions and instructions carefully before writing the answers.
- ◆ While answering the questions, consider score and time.


(5 x 1 = 5)

1. Who wrote 'Arthashastra'?
 - a) Bimbisara
 - b) Megasthenes
 - c) Chandragupta Maurya
 - d) Kautilya
2. Identify the Mesolithic site in England.
 - a) Ali Kosh
 - b) Star Carr
 - c) Chauvet
 - d) Jarmo
3. A few statements related to various lists in the seventh schedule of the Indian Constitution are given below. Identify the correct statements.
 - i) Foreign affairs, defence etc. are included in the Union List
 - ii) Railways, police etc. are included in the Concurrent List
 - iii) Agriculture, jails etc. are included in the State List
 - iv) Education, marriage etc. are included in the Union List
 - a) i), ii)
 - b) iii), iv)
 - c) i), iii)
 - d) ii), iv)
4. Identify the rivers between which the Utharakhand Himalayas are situated.
 - a) Indus - Satluj
 - b) Satluj - Kali
 - c) Kali - Teesta
 - d) Teesta - Brahmaputra
5. Identify the pass which connects Himachal Pradesh with Ladakh
 - a) Baralacha La
 - b) Banihal
 - c) Nathula
 - d) Rohtang

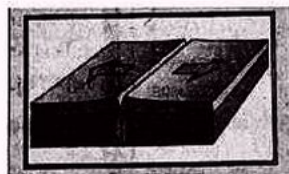
6. Write the peculiarities of Bhabar region in the North Indian Plain.
7. Complete the given chart related to the use of tools during the Palaeolithic Age.




8. Mention any three features of Indian Federalism.
9. Prepare a note on Buddhist Stupas.
10. Identify the Himalayan ranges represented by the given names.
 - a) Outer Himalayas
 - b) Greater Himalayas
 - c) Lesser Himalayas
11. What are the factors that help to make human resource more efficient?
12. Identify the plate boundaries represented by the given pictures.



a).....



b).....



c).....

13. Name any three doabs in the Punjab - Haryana plain.
14. Choose the correct pairs related to the Saptanga theory.
 - a) Mithra - Friendly countries
 - b) Swami - Ministers
 - c) Janapada - Land and People
 - d) Kosha - Justice
 - e) Durga - Fortified and protected area

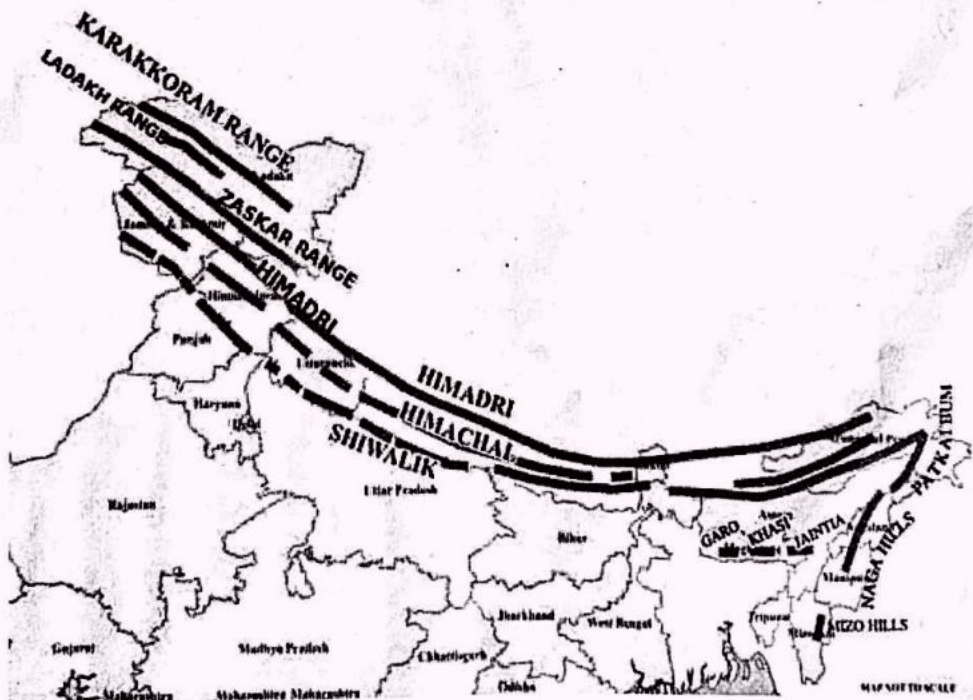
15. Identify the monsoon winds represented by the given map. Explain the direction of advancement of these monsoon winds.



16. Identify the factors of production based on its rewards given.

- | | |
|-------------------|-----------------|
| a) Rent | b) Wage |
| c) Interest | d) Profit |

17. Analyse the given map and answer the questions related to the Northern Mountain Region.



- Name any two mountain ranges included in Trans Himalayas.
- List out the major hills included in Purvachal.

18. List out any four features of the Indian Constitution.
19. What are the principles proposed by Mahavira for attaining Moksha (Salvation)? Identify its name.
20. Arrange the items in column 'B' appropriate to column 'A'

A	B
Patkaibum	Himachal Himalaya
Nainital	Kashmir Himalaya
Shimla	Utharakhand Himalaya
Mount K2	Purvachal Hills

21. What are the factors that led humans to begin agriculture and domestication of animals during the Neolithic Age?
22. What is 'Asoka Dhamma'? Elucidate the main ideas of Asoka Dhamma.
23. Identify and write the stone ages represented by the sites given below.
 Eg : Nevasa - Chalcolithic Age
 a) Chauvet -
 b) Daimabad -
 c) Jarmo -
 d) Lakhajoor -
24. Give reasons for the excessive cold weather experienced in the North Indian Plains during winter season.
25. Compare the life of the people in the early and later Vedic periods.

Hints :

- * Social status of women
- * Form of worship

26. Explain the different phases of tourism development in the Himalayan region.

Answer the questions 27 and 28 as per the directions.

27. A) Explain the characteristics of Himalayan drainage system based on the hints given.

Hints :

- * The Himalayan rivers and their origin
- * Land forms

OR

- B) What is natural vegetation? Explain any two types of natural vegetation in the North Indian Plains. (1x 5 = 5)

28. Analyse the social background that led to the emergence of new ideas in India during the 6th century BCE.

OR

Compare the life pattern of the Palaeolithic and Mesolithic humans based on the given hints.

Hints :

- * Stone tools
- * Ways of living
- * Division of labour

(1x 6 = 6)