





1. Kingini gave two baskets of Mangoes to The King of Kathirani. Find the total number of mangoes



Number of mangoes in the first basket -

6 Tens



Number of mangoes in the second basket -

3 Tens

Total number of mangoes?

Number of mangoes in the first basket

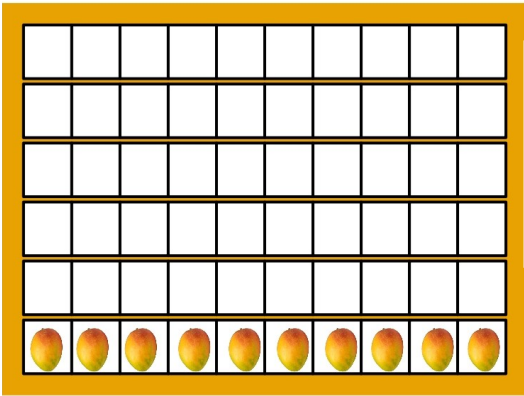
Number of mangoes in the second basket

Total number of mangoes

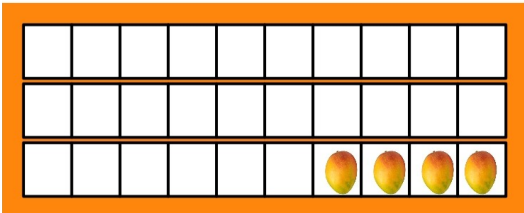
Tens	Ones
6	0

+

2. How many mangoes did the King eat?



How many mangoes are left after he ate from the 1st basket?

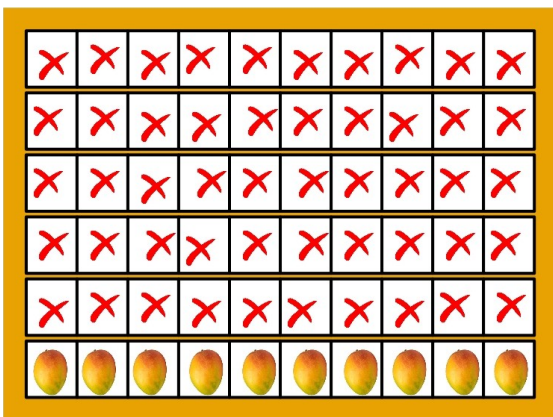


How many mangoes are left after he ate from the 2nd basket?

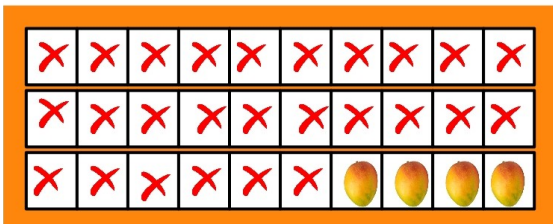
Total number of mangoes left?

Tens	Ones
1	0
	4

+



How many mangoes did the King eat from the first basket?



How many mangoes did the King eat from the second basket?

Total number of mangoes that the King ate

Number of mangoes ate from the first basket

Number of mangoes ate from the second basket

Tens	Ones

+

Total number of mangoes, the King ate

--	--





Another method.



3. More mangoes.....

The King started to eat mangoes again. 10 mangoes in each basket.




Total number of mangoes?

..... Tens

Total

In the morning the King ate....



How many mangoes did he eat in the morning?

In the evening the King ate..



How many mangoes did he eat in the evening?

Morning and evening, how many did he eat in all??

Number of mangoes he ate in the morning

Number of mangoes he ate in the evening

Total number of mangoes he ate

Tens	Ones

+

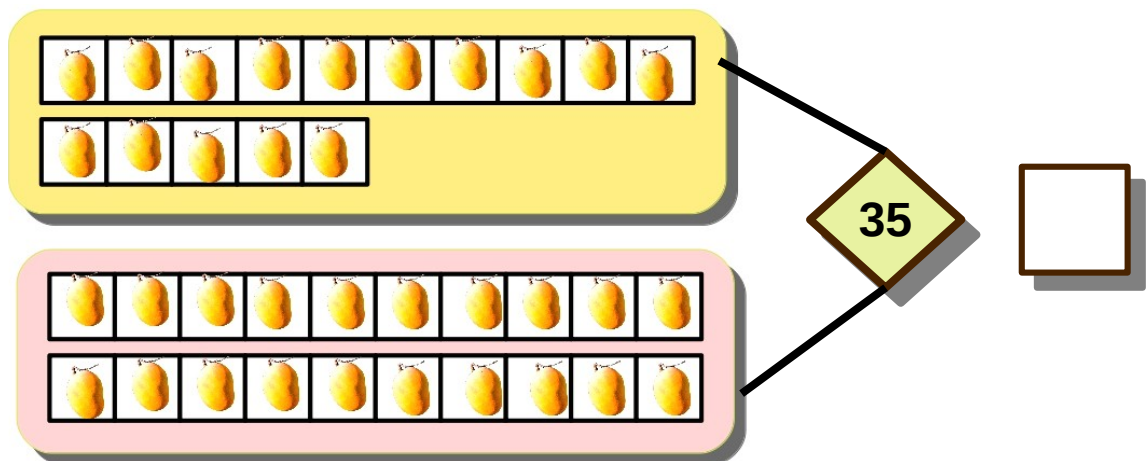


Another method..



4. How many mangoes?

35 mangoes are put in two plates. 15 mangoes in one plate. How many in the second plate?



5. Let's do textbook activities.

How many mangoes?

Two baskets of mangoes before the King.
60 in the first and 30 in the second.

How many in all?



The King ate some mangoes.

Only 10 are left in the first basket
and 6 in the second.

How many mangoes did the king eat?

From the first basket

From the second

Total

Another method I found out



Tens	Ones

Sweets

The king started eating laddoos.

10 laddoos in each plate



In the morning, the king ate all the laddoos in four plates and 6 more from the fifth.

How many laddoos did he eat in the morning?

In the evening he ate all laddoos in three plates and two more from another.

Morning and evening, how many did he eat in all?

My method

How many?

55 laddoos are put in two plates.

15 laddoos in one plate.

How many in the second plate?

Translated by:
ANJU.V.P



STD 2 MATHS



Activity 1

Find out how many mangoes Kingini gave to the king ?



Mangoes in the first basket

(Mangoes equivalent to 6 tens)



$$10+10+10+10+10+10$$



Mangoes in the second basket

(Mangoes equivalent to 3 tens)



$$10 + \dots\dots\dots + \dots\dots\dots$$



How much mangoes in two baskets ?

$$10+10+10+10+10+10 +10 +10 +10$$


Total mangoes



Tens	Ones
6	0
3	0

+

First basket



4

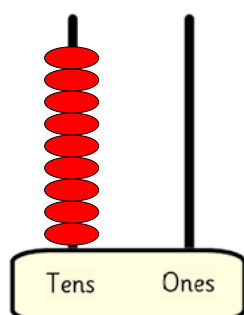
$$10 + 4 = \dots\dots\dots$$

The king ate mangoes =.....

10+10+10+10+10+10 +10 +10 +
1+ 1+ 1+1+ 1+ 1+ 1+ 1+ 1+ 1

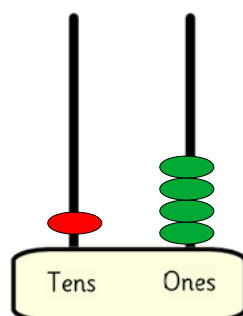
Draw in abacus....

Total mangoes



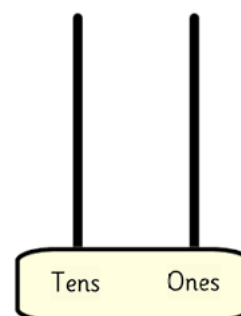
90

Remaining mangoes



.....

King ate mangoes



.....

Activity 3

How many mangoes did the king eat from the first basket ?

Mangoes in the first basket



How many mangoes are left ?



.....

The king ate mangoes

$$10+10+10+10+10+10$$

$$60- 10 = \text{.....}$$



How many mangoes did the king eat from the second basket ?

Total mangoes did the king ate $50 + 26 =$

Activity 4

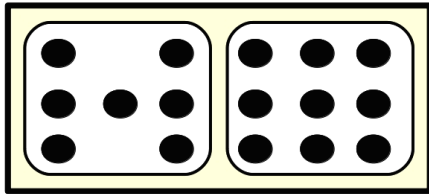
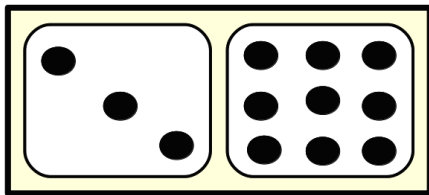
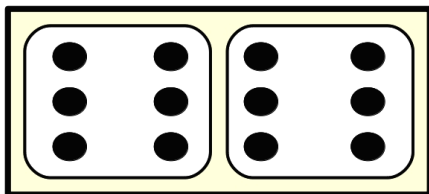
Complete the activities in TB page 45& 46



1. Find the points got to Kingini and Shuppandi in the game Dominoes.



Kingini




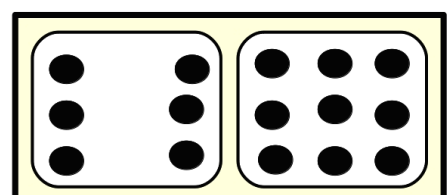
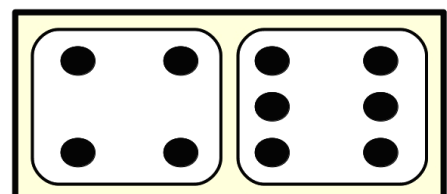
$$6 + 6 = \dots$$

$$\dots + \dots = \dots$$

$$\dots + \dots = \dots$$



Shuppandi



$$\dots + \dots = \dots$$

$$\dots + \dots = \dots$$

$$\dots + \dots = \dots$$




2. How many more?

Look the total points got Kingini and Shuppandi

How many points for each one?



Kingini




7 Tens 8 Ones

Total



Shuppandi



.... Tens Ones

Total

Who got more points?

How many points Kingini got more than Shuppandi?

How many tens got Kingini more than Shuppandi?

How many ones got Kingini more than Shuppandi?

How many tens and ones?

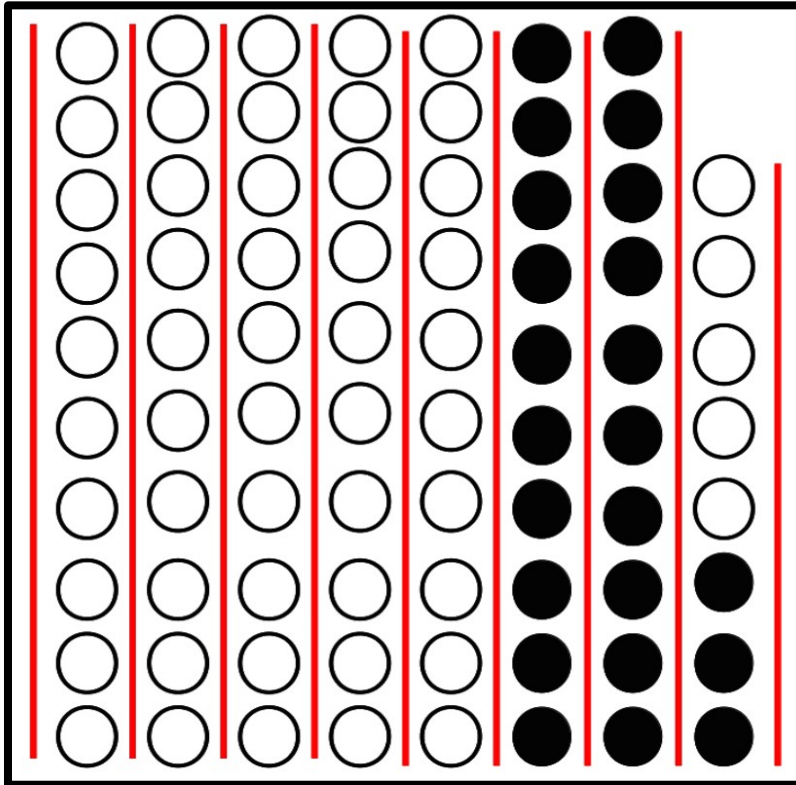
.... Tens Ones

How many points Kingini got more than Shuppandi?



Another method

How many points got Kingini more than Shuppandi?




We can ask,
How many points
Got Shuppandi less
than Kingini?



**Subtract the points
of Kingini from the points of Shuppandi.**

One more method



Points that Kingini scored

**Points that Shuppandi
scored**

**The more points got
Kingini**

Tens	Ones
7	8
5	5


—

--	--



3. Number of bananas.

Look the number of bananas got Kingini and Shuppandi as gift. 10 bananas in each bunch.



How many bananas got to each one?

Kingini

$$40 + \dots = \dots$$

Who got more bananas?

How many more ?

How many tens?

How many ones ?

How many tens and ones?

.... Tens Ones

=

Shuppandi

$$\dots + 3 = \dots$$

Tens	Ones

-

Bananas
Kesu and Ramu brought bananas for the King.
10 bananas in each bunch.

How many bananas did each bring?

Kesu:

Ramu:

Who brought more bananas?
How many more?
Two bunch and 3 more.
Total 20 + 3 = 23 more.

I need only subtract 35 from 78

The King ate 43 bananas from those Kesu brought.
How much left in Kesu's lot?

Kesu brought bananas
The king ate bananas
Remaining bananas

How do we subtract 43 from 78?
First, subtract 3 ones from 8 ones.
5 ones left.
Then subtract 4 tens from 7 tens.
3 tens left.
Total 3 tens and 5 ones.
Total is, 35.
We can write this as

Tens	Ones
7	8
4	3
3	5

Ramu had brought 35 bananas and the king ate 32 of them.
How much is left?
My method

Tens	Ones

Let's do textbook activities

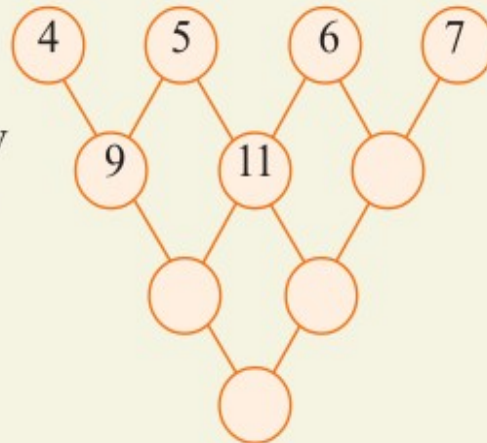


ACTIVITY 1

Let us find.... who is hiding...

Add and add


Add the numbers in the nearby circles and write the answer in the circle below them.



Check your answers with the clues given below..

Write in correct column.

10
10
1
1
1
1



1
1
1
1
1
1
1
1




10
1




10
1
1
1



10
10



10
10
10
10
1
1
1
1



**ACTIVITY 2**

Hey ...here is a box of Fishes for the Kitties of Kingini and Suppandi..
Can you count and write ..?



Tens

Ones

Total

--	--	--



15 fishes gave to Kingini's kitty.

How many fishes will remain there?

Write as below and find

പത്തുകൾ Tens	ഒന്നുകൾ Ones	
5	5	-
1	5	

**ACTIVITY 3**

Suppandi's Kitty is very happy to get the balance fish....

How many fishes did she get ?



Let us write how many each got..



15

+

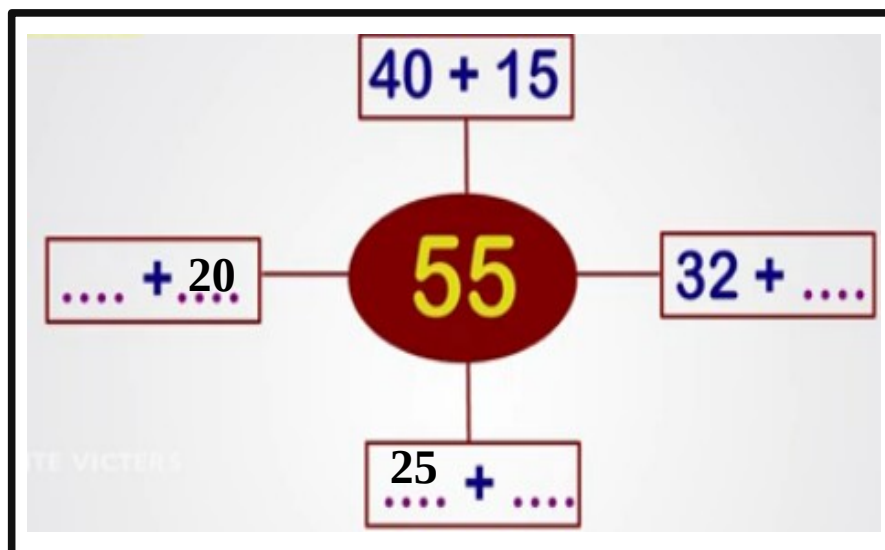


=

Total

ACTIVITY 4

Find the numbers...



**ACTIVITY 5**

Text book activities on page 46, 49

How many?

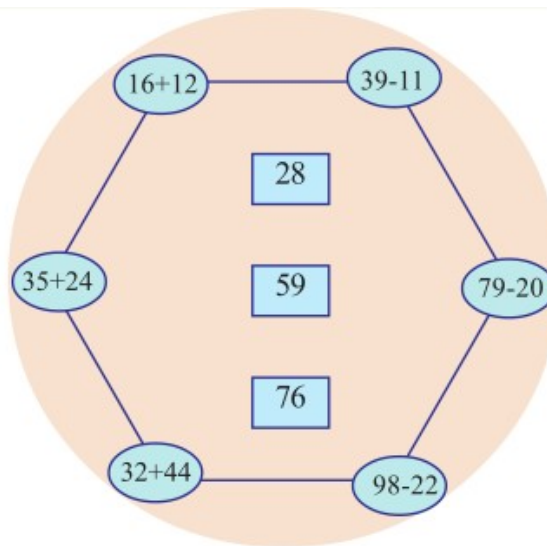
55 laddoos are put in two plates.

15 laddoos in one plate.

How many in the second plate?

**Connections**

Connect each sum to the correct answer.



Hi children ...

Aswin made a Maths kit ...




Let us make a Maths kit and collect the materials needed..



ACTIVITY 1

Hi friends...

Today Kingini , Jaggu and Suppandi went to the fruit stall and took their favourite fruits as below



Look the following table and try to answer the below questions...

Name	Name of fruits	Numbers
Kingini	Rambutan	25
Jaggu	Banana	55
Shuppandi	Apple	45

a) Who took most fruits? How many?

b) Who took least fruits? How many?



- c) Kingini ate some Rambutans. 10 Rambutans were left in the box.
How many fruits did she ate?

പത്തുകൾ Tens	ഒന്നുകൾ Ones
2	5
1	0

- d) Jaggu ate full banana and also some apples from Suppandi's basket.
Total fruits he ate was 85. Then How many apples did he ate?

പത്തുകൾ Tens	ഒന്നുകൾ Ones
8	5
5	5

- e) How many Apples did Suppandi got after giving to Jaggu?

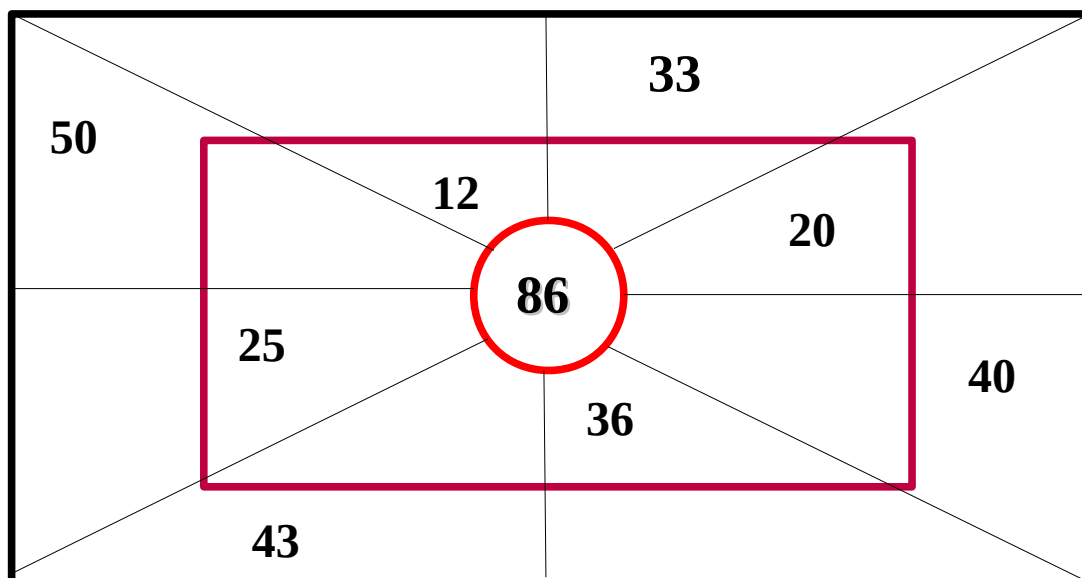
പത്തുകൾ Tens	ഒന്നുകൾ Ones
4	5
3	0

From the above details try to fill the table below...

Name	No.of Rambutans ate	No.of bananas ate	No. Of apples ate	Total
Kingini				
Jaggu				85
Suppandi				

**ACTIVITY 2**

Fill the columns by subtracting the numbers from the number given in the circle.



Do the activities in text book page number 50

ACTIVITY 3

Complete the number chain

Subtract from each number the number in the next circle and write in the circle below.

