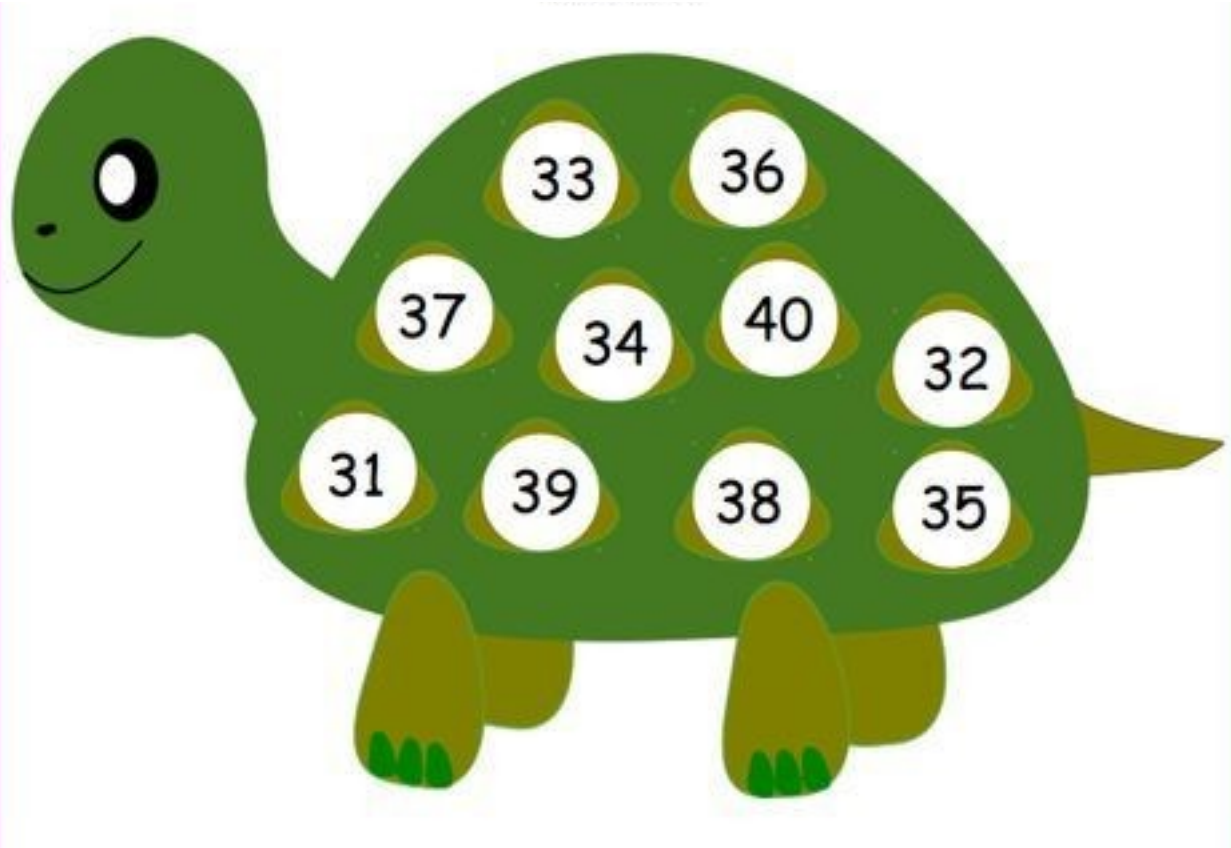





1. Look at the numbers.




Arrange the numbers from smallest to biggest.

				35					
--	--	--	--	----	--	--	--	--	--

Which is the smallest number




Which is the biggest number





2. Find the numbers and colour it.



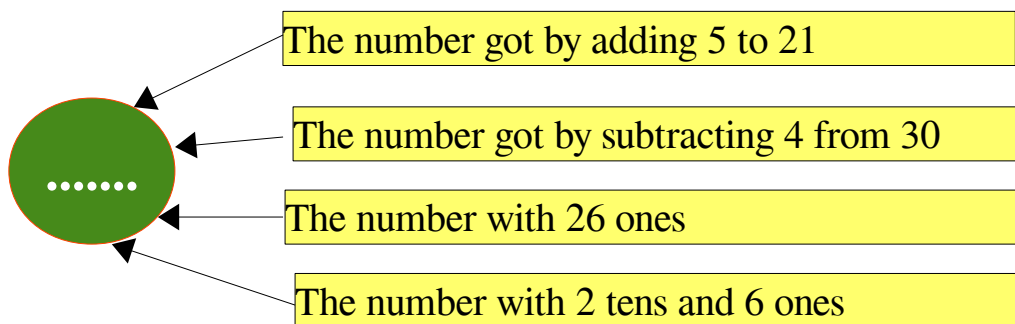
Find the answers below and colour the box.

- **2 tens 2 ones**
- **$4+6+9 =$**
- **Number between 73 and 75**
- **5 tens 1 ones**
- **The number got by subtracting 3 from 40**
- **$7+6+3 =$**
- **2 tens and 13 ones**
- **the number got by adding 5 to 20**
- **The number between 6 tens 2 ones and 64.**
- **9 tens and 0 ones**

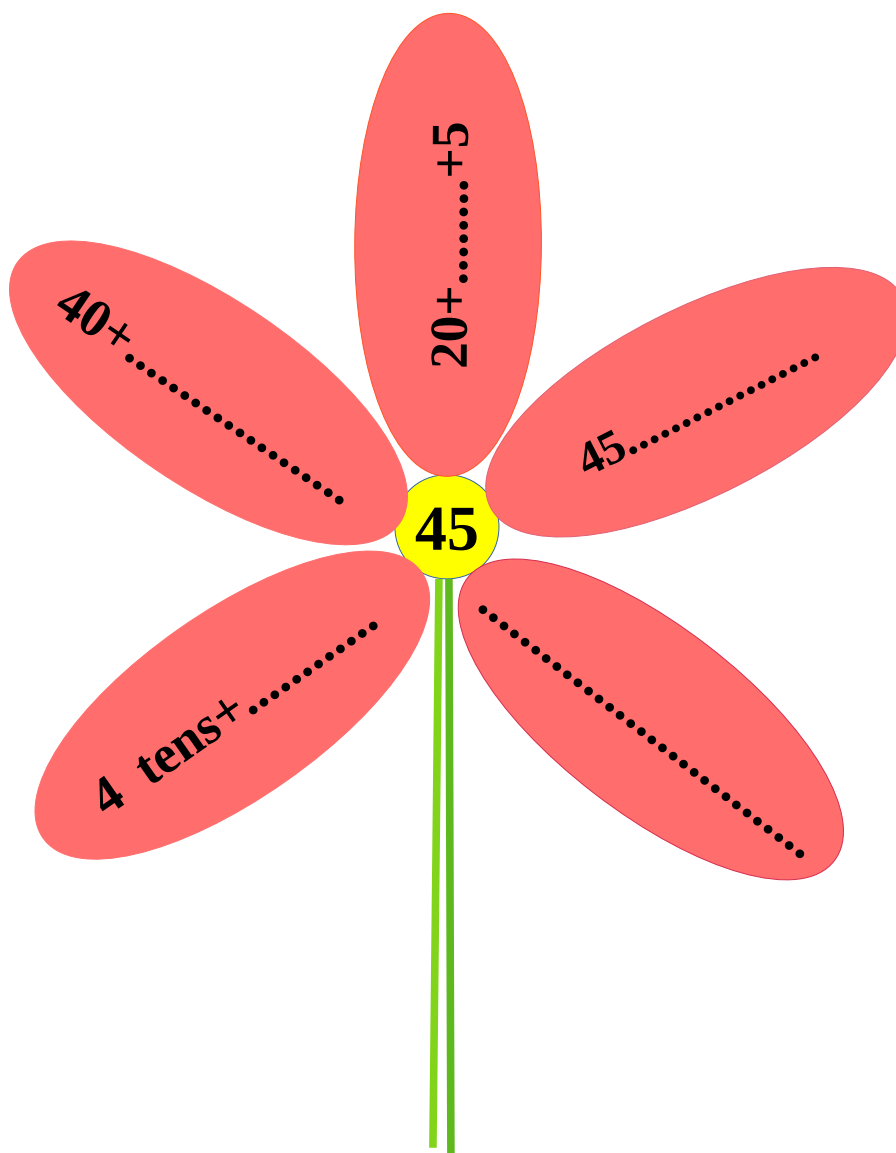
16	90	94	63
60	40	51	19
44	22	8	33
74	85	25	69
11	37	82	19



3. Which number?



4. Write the number in different ways..





5. Find the price.

Items	Price in rupees
bangle	10
ball	9
kite	5
doll	20

Ammu bought a bangle and a kite. How many rupees?

Manu bought a ball and a doll. How many rupees?

Lizzy bought a ball and a kite. How many rupees?

Lizzy gave 2 ten rupees notes. How much would he get back?

Unni has 25 rupees with him. What toys can Unni buy?



6. Look at the calendar.

sunday	monday	tuesday	Wednes day	thursday	friday	saturday
	1	2	3	4	5	6
7	8	9	10	11	12	13
14	15	16	17	18	19	20
21	22	23	24	25	26	27
28	29					

Which dates are Sundays? Write in order.

Which date is the Second saturday?

Which is the last day of the month?

Which dates are fridays? Write in order.