



STD MATHS



Activity 1

Look at the amount given by the children to build a house for veluchettan. Find and write down the amount given by each one.



Thanu



Jumana



Manu



Laila



25

.....

.....

.....

Who gave the most?



How much?

Activity 2




Look at the receipt and find out how much each person had donated.

Receipt Name : LIBIN Amount : THIRTY FIVErupees) (Sd/-)	Receipt Name : PRABEESH Amount : FIFTYrupees) (Sd/-)
Receipt Name : JAMSHEED Amount : FIFTYrupees) (Sd/-)	Receipt Name : SREEJITH Amount : FIFTYrupees) (Sd/-)




Libin paid Rs 35 with 3 notes and a coin. Which notes and coins were given.






Prabeesh paid Rs 50 with 4 notes .Which notes are given.



Jamsheedh paid Rs 50.He gave 2 notes and 2 coins.Which of the notes and coins given.



Sreejith paid Rs 50 with 3 notes .Which notes are given.



Activity 3

Complete the Textbook activities in page no 29,30

(Building a house,Receipts,Other donations.)

Activity 4



Which notes and coins can be used to get these amounts in the table.

പേര് Name	സംഭാവനകൾ Donation
ചൈതന്യ	60 രൂപ
കിരൺ	80 രൂപ
മിനീഷ്	75 രൂപ
പ്രമോദ്	85 രൂപ