

# CLASS 5

## SUBJECT: MATHEMATICS

### PRE-TEST

Pri- MATH

പാലക്കാട് ഗണിത കൂട്ടായ്മ

Student 's name:-----

School:-----

1. Complete the pattern.

a. 85,90,95,---,---

b.24,20,16,---,---

Answer:



2. The place value of 5 in 4578 is:

( 5,50,500,5000)

Answers:




3.

a.1 meter = ----- centimetres

b.1 kilogram=----- gram

Answer :



4. Find the sum of largest 3-digit number and smallest 3-digit number.

Answer:



5. Find the difference between the largest 2-digit number and smallest 2-digit number.

Answer:



6. Write the following in ascending order: 458,756,485,705,901

Answer:

A large, empty rectangular box with a black border, intended for the user to write the answer to the question.

7. Raju bought vegetables for rupees 235, he gave rupees 500 note to the shopkeeper .How much rupees he will get back?

Answer:

A large, empty rectangular box with a black border, intended for the student to write their answer to the problem.


8. Cost of one pen is rupees 8, then find the cost of 15 such pens.

Answer:

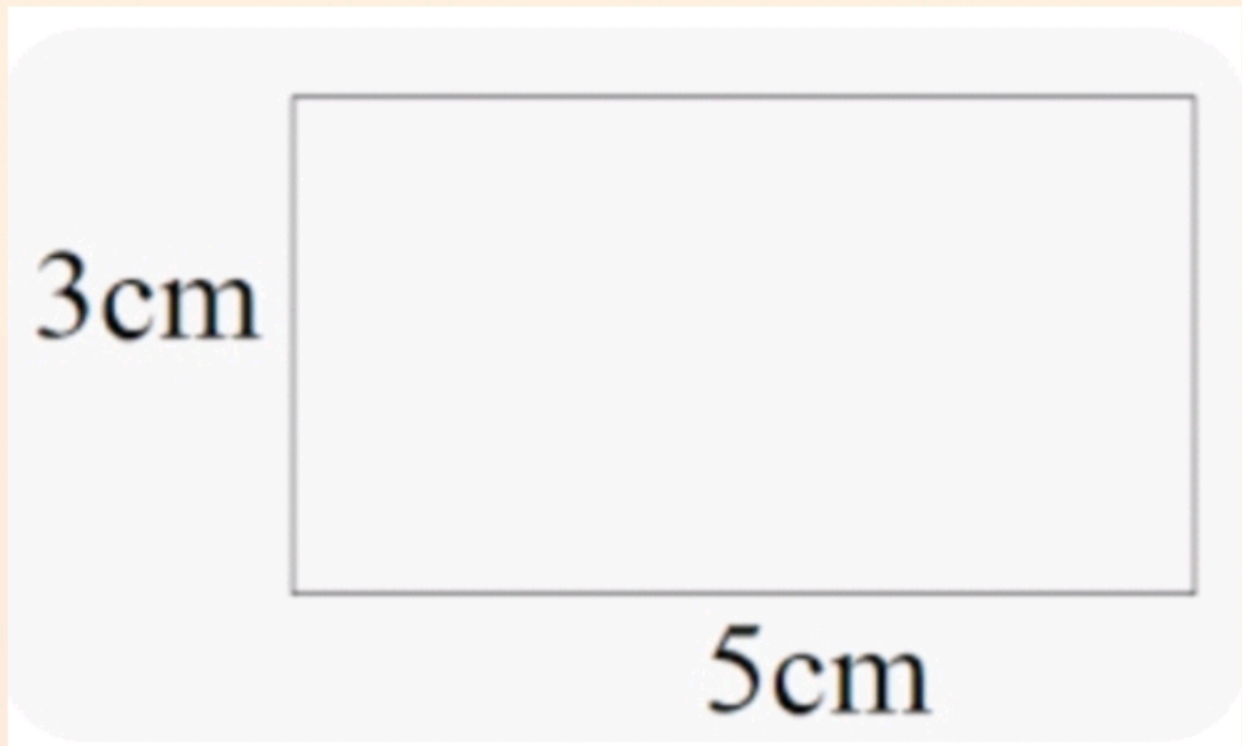


9. In a class teacher distributed 2 gooseberries each for children. She had 64 gooseberries in all . Find the number of children in the class .

Answer :



10.



- Write the name of the above given figure.
- Find the perimeter of the above given figure.

