

Class : 3 Math can draw shapes


Total Points : 10

Child's Name: _____

Unit test

(1) What forms?

This is a film made by Varun by combining figures obtained from the school math lab.



1

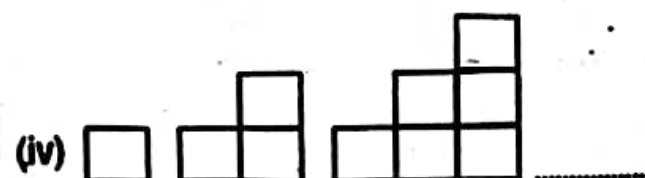
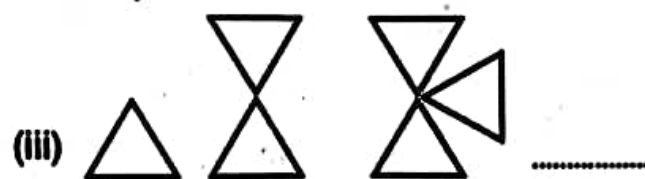
(a) What shapes are there in the picture?

(b) How many of each shape are there?

3

(2) Who is next?

Draw the next picture.



(3) Draw the picture

Draw a picture of your choice using triangle, circle and square shapes.

2

