






MATHS

1. Select the odd one shape? (5)

- A) 

C) 

E) 
- B) 

D) 

2. Count the number of each shapes? (3)

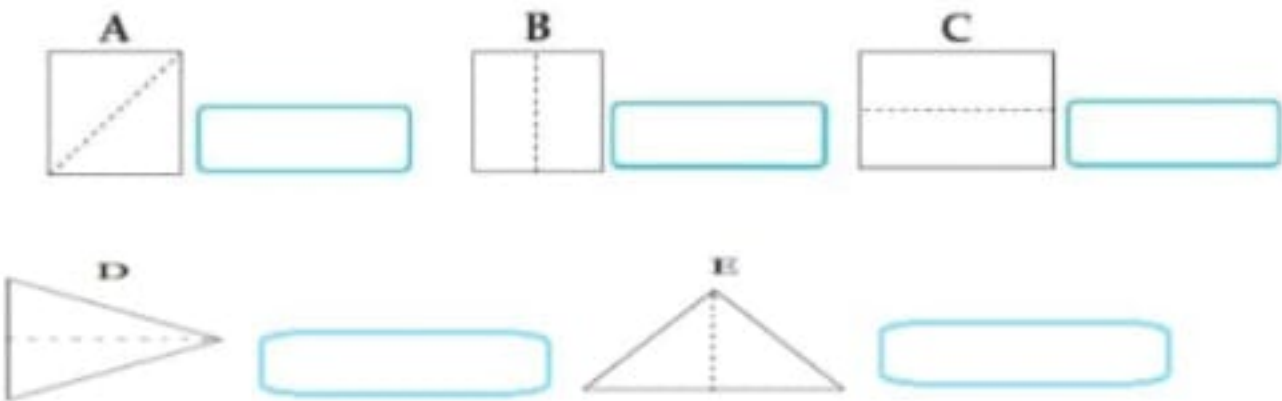


Shape	Triangle	Rectangle	Circle
Number			


3. Answer the following questions? (2)


- A) How many eerikkil bits did you use to make one rectangle?
- B) How many eerikkil bits did you use to make one triangle?



4. What shapes do you get by cutting along the dotted line? (5)




5. Draw what comes next in each of pattern below? (5)

- A) 

C) 

E) 
- B) 

D) 

6. Fill in the table below? (5)

Rectangle	Triangle	Circle
.....	Coin
.....	Birthday cap
Table	Ice cream cone