




Intervention Based On Effective Leisure Learning



MATHEMATICS

1/7/21

Learning objectives

- ★ Making 2 digit numbers by adding ones to tens.
- ★ Identifying smallest and largest numbers.

Thankappan and Ponnappan

What will be the number when
Thankappan and Ponnappan join?



When Thakappan and Ponnappan join



Adding 10 to tens

When 10 joins to 10

20

When 10 joins to 20

When 10 joins to 30

When 10 joins to 40

When 2 tens join

20

When 3 tens join

When 4 tens join

When 5 tens join

Tens and Ones

If Ones added to Tens?




Tens

Ones



1 Ten
and
6 Ones

16



Most Least

Which is most and which is least in the number of buttons given below?

12

27

35

46



Most

Least

Complete this page
in your text book

Site Seeing

Abhinand, Nandana and Unni gathered gooseberries.



See the berries in groups. Write the number.



Unni





Abhinand





Nandana



Who got the most?

Who got the least?