



## STD 2 Mathematics



### Activity 1

Let's go to the garden

Below are the flowers from which “Ammu Poombatta” and “Moolan Theneecha” drank honey. Let's see from how many flowers they drank honey



6



Total number of flowers from which Ammu Poombatta drank honey

$$\boxed{\phantom{00}} + \boxed{\phantom{00}} + \boxed{\phantom{00}} = \boxed{\phantom{00}}$$



Total number of flowers from which "Moolan Theneecha" drank honey

$$\boxed{\phantom{00}} + \boxed{\phantom{00}} + \boxed{\phantom{00}} = \boxed{\phantom{00}}$$

Who drank honey from more flowers ?



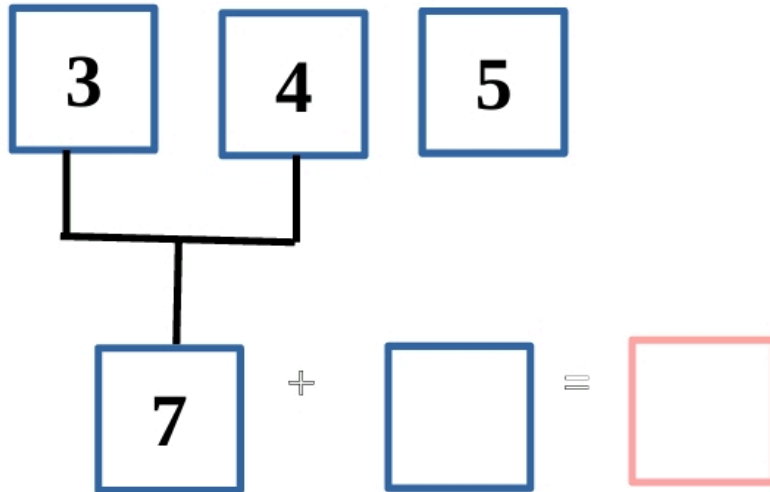
Total number of flowers from which "Karivandu" drank honey

$$\boxed{6} + \boxed{5} + \boxed{2} = \boxed{\phantom{00}}$$

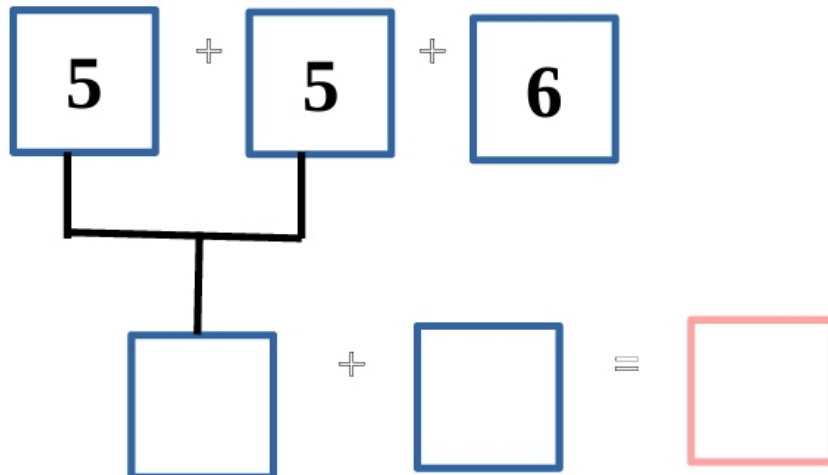
## Activity 2

Let's Add

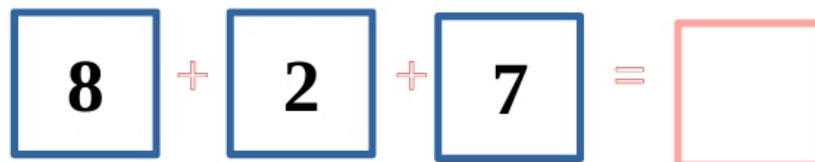
1.



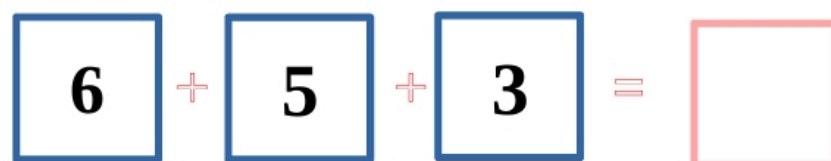
2.



3.



4.





### Activity 3

Can you guide the Bee into the cage ?

Find the sum of the numbers and give colour to  
The honey comb having correct answer

$$4+5=9$$

$$1+2+3=$$

$$8+3+2=$$

$$6+5=$$

$$3+5+6=$$

$$8+2+5=$$

$$5+3+4=$$

$$9+5+8=$$

$$5+5=$$

$$6+6+6=$$

