

# SSLC MODEL EXAMINATION, MARCH - 2022

## CHEMISTRY

(English)

Time : 1½ Hours

Total Score : 40

### Instructions :

- There is a 'Cool-off time' of 15 minutes in addition to the writing time. Use this time to get familiar with questions and to plan your answer.
- Questions with different scores are given as distinct parts.
- Read the instructions carefully before answering the questions.
- Keep in mind, the score and time while answering the questions.
- The maximum score for questions from 1 to 24 will be 40.

### PART - I

Score

Questions from 1 to 9 carry 1 score each.

A. Answer any 4 questions from 1 to 6.

4x1=4

1. Which Subshell is common to all shells ? 1
2. The number of molecules present in 1 GMM  $N_2$  is \_\_\_\_\_. 1
3. Which one of the following metals react with hot water ? 1  
[Au, Cu, Ag, Mg]
4. Fill up suitably : 1  
-OH : Hydroxyl group  
-COOH : \_\_\_\_\_
5. Complete the given chemical equation. 1  
 $NH_4Cl \rightarrow \text{_____} + HCl$
6. Which is the method used to concentrate Sulphide ores ? 1

P.T.O.

B. Answer all questions from 7 to 9.

Score  
3x1=3

7. In f-block elements, the last electron is filled in \_\_\_\_\_ subshell. 1
8. Which substance is deposited at the Cathode, when molten Sodium Chloride is electrolysed ? 1  
[Oxygen, Chlorine, Sodium, Hydrogen]
9. In electrolytes \_\_\_\_\_ are responsible for the conduction of electricity. 1

### PART - II

Questions from 10 to 12 carry 2 scores each.

A. Answer the following question.

1x2=2

10. (a) Which of the following chemicals are used to prepare ammonia ( $\text{NH}_3$ ) in the laboratory ? 1  
[NaCl,  $\text{Ca}(\text{OH})_2$ ,  $\text{CaCl}_2$ ,  $\text{NH}_4\text{Cl}$ ]
- (b) Ammonia gas produced is passed through quick lime. Give reason. 1

B. Answer any one question from 11 to 12.

1x2=2

11. The volume of 1 mole of any gas at STP is 22.4 L. What will be the volume of 34 g  $\text{NH}_3$  at STP ? 2  
[1 GMM  $\text{NH}_3 = 17 \text{ g}$ ]
12. Copper is electroplated on an iron ring.
- (a) Which electrolyte is used here ? 1
- (b) Which metal is connected to the positive terminal of the battery ? 1

### PART - III

Questions from 13 to 17 carry 3 scores each.

A. Answer any three questions from 13 to 16.

3x3=9

13. Match columns A, B and C suitably :

3

A	B	C
Alloy steel	Property	Use
Stainless steel	High resistance	For the manufacture of permanent magnets
Nichrome	Magnetic nature	For the manufacture of utensils
Alnico	Hard	For making heating coils

14. In element A (Symbol is not real), the last two electrons are added to the 4s subshell.

- (a) Write down the subshell electronic-configuration of A. 1
- (b) Which period does it belong to? 1
- (c) Find its group number. 1

5.  $N_{2(g)} + 3H_{2(g)} \rightleftharpoons 2NH_{3(g)} + \text{Heat}$

How do the following changes affect rate of forward reaction in the given system at equilibrium?

- (a) Pressure is decreased 1
- (b) Temperature is increased 1
- (c) More  $H_2$  is added 1

16. Choose the name of reaction from the given box and complete the table.

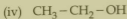
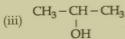
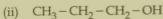
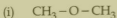
Substitution reaction, Thermal Cracking,  
Addition reaction, Combustion, Polymerisation

Chemical equation	Name of reaction
$CH_2 = CH_2 + H_2 \rightarrow CH_3 - CH_3$	_____
$CH_4 + 2O_2 \rightarrow CO_2 + 2H_2O$	_____
$CH_3 - CH_3 + Cl_2 \rightarrow CH_3 - CH_2 - Cl + HCl$	_____

**B. Answer the following question.**

1x3=3

17. Examine the following compounds and answer the questions.



- (a) Find out the isomeric pairs. 2
- (b) Which is the functional group of  $CH_3 - O - CH_3$ ? 1

## PART - IV

Questions from 18 to 22 carry 4 scores each.

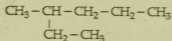
A. Answer any two questions from 18 to 20.

2x4=8

18. The relation between pressure and volume of a fixed mass of gas at constant temperature is given in the table.

Pressure (P) atm	Volume (V) L	$P \times V$
1	200	200
2	(a)	200
(b)	50	(c)

- (a) Find the values of a, b and c.  
 (b) Which gas law is applied here ?
19. The structural formula of a hydrocarbon is given :



- (a) Write the molecular formula of the given hydrocarbon.  
 (b) How many carbon atoms are there in the longest carbon chain ?  
 (c) Name the branch present.  
 (d) Write its IUPAC name.
20. The following chemical equations represent the reactions taking place in the blast furnace during the manufacture of iron.

- $\text{C} + \text{O}_2 \rightarrow \text{CO}_2 + \text{Heat}$
- $\text{CO}_2 + \text{C} + \text{Heat} \rightarrow 2\text{CO}$
- $\text{Fe}_2\text{O}_3 + 3\text{CO} \rightarrow 2\text{Fe} + 3\text{CO}_2$
- $\text{CaCO}_3 \rightarrow \text{CaO} + \text{CO}_2$
- $\text{CaO} + \text{SiO}_2 \rightarrow \text{CaSiO}_3$

- (a) Which is the ore of iron used in the blast furnace ?  
 (b) Which substance acts as the reducing agent in this process ?  
 (c) What is the role of CaO in this process ?  
 (d) Which one of the given chemical equations represent slag formation ?

B. Answer any one question from 21 to 22.

21. Choose the correct answer from the box.

Ethanoic acid, Sodium hydroxide,  
Methanol, Glycerol, 95.6% Ethanol

- (a) Which alcohol is known as wood spirit ? 1
- (b) Which substance is known as rectified spirit ? 1
- (c) Name the acid present in vinegar. 1
- (d) Which is the by-product in the manufacture of soap ? 1
22. A few drops of concentrated sulphuric acid is added to sugar.
- (a) What do you observe ? 1
- (b) Which property of concentrated sulphuric acid is shown here ? 1
- (c) Why concentrated sulphuric acid is not used as a drying agent in the preparation of ammonia ? 1
- (d) Which substance is used to identify sulphate salts ? 1
- (NaCl, KCl, BaCl<sub>2</sub>, BaSO<sub>4</sub>)

### PART - V

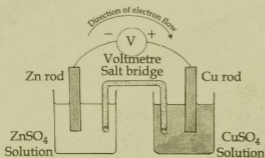
Questions from 23 to 24 carry 5 scores each.

A. Answer any one question from 23 to 24.

1x5=5

23. The atomic number of an element X is 13. (Symbol is not real)
- (a) Write down the subshell electronic configuration of element X. 1
- (b) Write down its subshell electronic configuration using the symbol of preceding noble gas. 1
- (c) Which block does it belong to ? 1
- (d) Find the total number of electrons in all the p subshells of this element. 1
- (e) Write down the subshell electronic configuration of X<sup>3+</sup> ion. 1

24. The diagram of a galvanic cell is given.



[Hint : Order of reactivity  $Mg > Zn > Fe > Cu > Ag$ ]

- |  |   |
|--|---|
| (a) What is the energy change taking place in a galvanic cell ?  | 1 |
| (b) At which electrode does oxidation take place ?   | 1 |
| (c) Which metal does act as the cathode ?  | 1 |
| (d) If Silver and Copper are used as electrodes to construct the cell, which metal does act as the anode ? | 1 |
| (e) Write down the chemical equation of the reaction taking place at Copper electrode in this case.        | 1 |

- o O o -