

SUMMATIVE ASSESSMENT - I - 2021 - 22**SOCIAL STUDIES****(English Medium)****Class : X****(Max. Marks:100)****Time : 3.15 Mnts.**

	AS - I				AS - II				AS - III			AS - IV			AS - V			
Q.No	1-4	13-16	21-23	29-30	5-6	17	24-25	31	7-8	18-19	26	9-11	27	32	12	20	28	33
Marks																		
Total																		

Name of the student : **Roll Number :**

INSTRUCTIONS :

1. 15 minutes are allotted for reading the question paper in addition to 3.00 hour's which is allotted for writing the answers.
2. All answers should be written in the separate answer booklet
3. There are four sections in the question paper
4. There is an internal choice in section - IV
5. In question No. 33 both A & B (India map and World map) should be answered separately

SECTION - I

Note : 1. Answer all questions.

2. Each question carries 1 Mark.

12 x 1 = 12

1. Which longitude is taken as Indian Standard meridian?
2. Expand GDP
3. What is meant by 'Organised Sector'?
4. Identify which is not a Himalayan River (River Ganges, River Indus, River Krishna, River Brahmaputra)
5. Who called that the 20th Century as "The age of Extremes"?
6. What was the immediate cause for the world war - II ?
7. Who established Nazi Party?
8. Name the movement which was started in 1942 August by Gandhiji?

[Turn Over

9. Who wrote the poem of "Sare Jahan Se Acha Hindustan Hamara"?
10. Name the International organisation which was established after world war - I
11. Plot the International on a bargraph.

Name of the state	IMR per 1000 (2006)
Himachal Pradesh	36
Bihar	62

12. Arrange the given states from north to south according to their location.

Tamilnadu, Haryana, Madhya Pradesh, Telangana

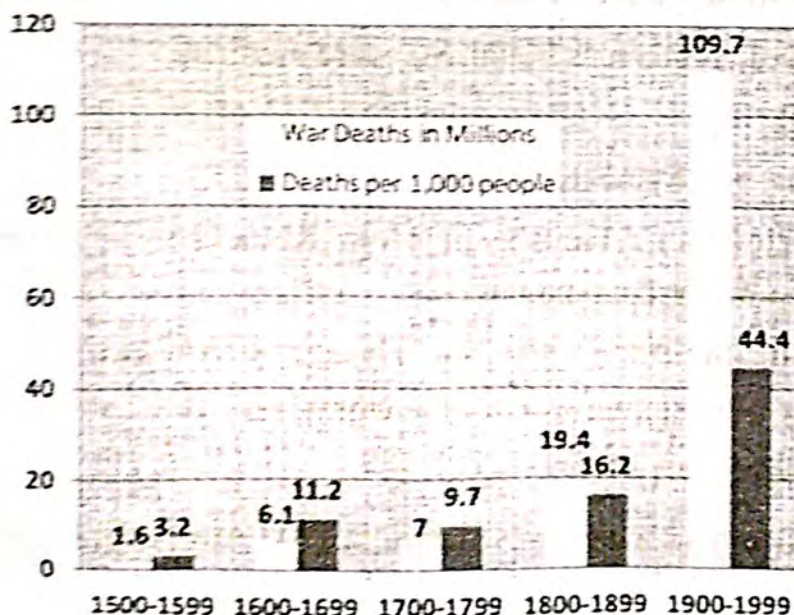
SECTION - II

Note : 1. Answer all the questions.

2. Each question carries 2 Marks.

$8 \times 2 = 16$

13. What are the major Relief divisions in India
14. Write any two consequences of the world wars
15. How many categoies of economic activities are there? What are they?
16. With the creation of muslim nation, Pakistan, a painful and unimaginable situation arose before many people in 1947. - Comment.
17. The drains on rivers have gradually lost its water storage capacity in present days. Write any two reasons for it.
18. Write any two slogans to control global warming.
19. Observe the given graph and analyze it.



[Contd... 3rd

20. Observe the given map and answer the questions given below.



i) What does the above map explain

ii) Write any one island from the given map.

SECTION – III

Note : 1. Answer all questions.

2. Each question carries 4 Marks.

8 x 4 = 32

21. Write about the importance of Himalayas
22. Write about the south west monsoon system in India.
23. Write any four results of the great depression.
24. Write the role of Subhash Chandra Bose in Indian National movement.
25. Write any two slogans to control water pollution.
26. Write any four suggestions to avoid wars and maintain world peace.
27. Observe the given information and answer the questions given below.

i) In which country the Bloody Sunday and the revolution happened?

Debates over socialism in Russia.

• 1850s-1880s

Formation of the Russian Social Democratic Workers Party.

• 1898

ii) What is Civil war ?

The Bloody Sunday and the Revolution

• 1905

2nd March - Abdication of the Tsar. 24th October - Bolshevik uprising in Petrograd.

• 1917

The Civil War

• 1918-20

Formation of Comintern

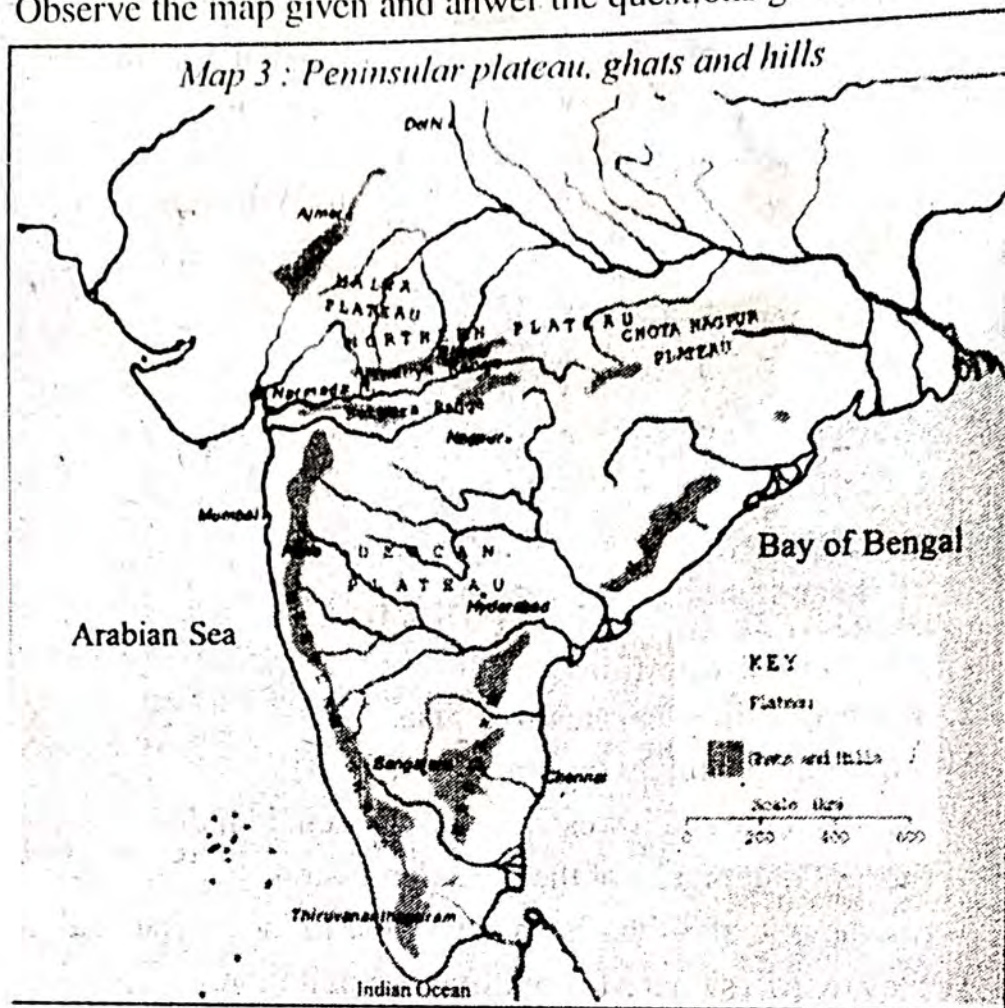
• 1919

Beginning of Collectivisation

• 1929

[Turn Over

28. Observe the map given and answer the questions given below.



- Which mountains are located as the northern boundary to deccan plateau.
- Name the oldest folded mountains in India.

SECTION – IV

Note : 1. Answer all questions.

2. Each question carries 8 Marks.

3. There is an internal choice for each question $5 \times 8 = 40$

29. a) Explain about the schooling evolution in Himachal Pradesh.

(Or)

- b) How are human activities contributing to Global warming.

30. a) "Both the two world wars effected all the countries in the world during the first half of the 20th Century." Do you agree with the statement? Or oppose it?

(Or)

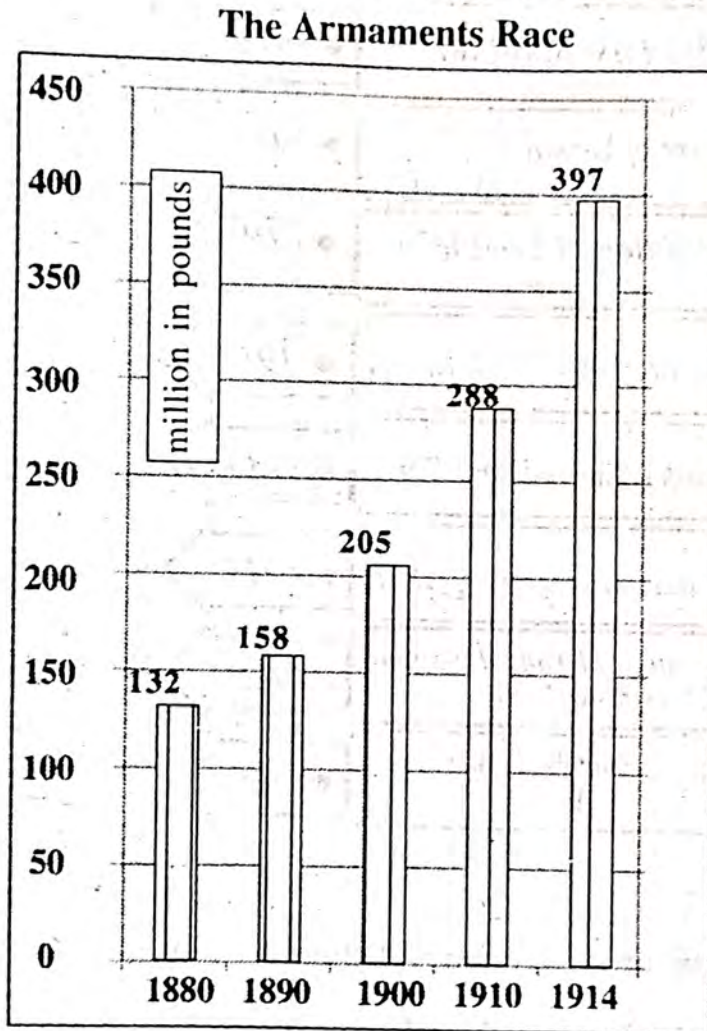
- b) "Integration of various princely states into the new Indian nation was a challenging task." - comment.

[Contd... 5th

31. a) What are disagreements between "Developed" and "Developing" countries about AGW?

(Or)

- b) Which aspects of farming practices were regulated in the context of Hiware Bazar to improve the water conservation?
32. a) Observe the graph and answer the questions given below.



- i) What does the graph explain
- ii) What was the military expenditure by the great powers in 1880?
- iii) What was the military expenditure by the great powers in 1914?
- iv) What was the major incident happened in 1914?

(Or)

[Turn Over

b) Observe the table and answer the questions given below.

<i>Beginning of First World War July</i>	● 1914
<i>Russian Revolution</i>	● 1917
<i>End of First World War</i>	● 1918
<i>Treaty of Versailles</i>	● 1919
<i>Formation of League of Nations</i>	● 1919
<i>Rise of Hitler in Germany</i>	● 1933
<i>Breakout of Second World War</i>	● 1939
<i>German Invasion of USSR</i>	● 1941
<i>Formation of United Nations Organisation</i>	● 1945
<i>End of Second World War August</i>	● 1945

- i) Which treaty was conducted after the world war - I?
- ii) When did the second world war started?
- iii) In which year UNO was formed?
- iv) What was the major incident happened in 1917?

33. a) Locate the following places in the given out line map of India

- | | |
|-----------------------|--------------------------|
| i) Himachal Pradesh | ii) River Godavari |
| iii) Tropic of cancer | iv) Mount K ₂ |

(Or)

- | | |
|----------------|-----------------|
| v) Sikkim | vi) River Indus |
| vii) Pakstrait | viii) Ladakh |

(Or)

b) Locate the following places in the given outline map of the World

- | | |
|---------------------|------------------------------|
| i) Germany | ii) Japan |
| iii) Atlantic Ocean | iv) United States of America |

(Or)

- | | |
|-------------------|--------------|
| v) Italy | vi) Russia |
| vii) Indian Ocean | viii) Brazil |



