

SSLC - 2022
MATHEMATICS
Practice Question for C Grade

1. ARITHMETIC SEQUENCES

1. Write an arithmetic sequence with common difference 3.

- (a) 3, 6, 9, _____
- (b) 4, 7, 10, _____
- (c) _____, _____, _____, _____,
- (d) _____, _____, _____, _____,

2. Write first term and common difference of the arithmetic sequence.

(a) 10, 12, 14, 16, _____

$$\begin{array}{l} \text{First term } f \\ \quad \quad \quad a \\ \quad \quad \quad t_1 \end{array} \left. \vphantom{\begin{array}{l} f \\ a \\ t_1 \end{array}} \right\} = 10$$

Common difference $d = 12 - 10 = 2$

- eg: 1) 8, 12, 16,
- 2) 15, 18, 21,
- 3) 21, 26, 31,

3. Complete the sequence.

(1) 24, 42, _____, _____

Ans: $d = 42 - 24 = 18$

24, 42, 60, 78

(2) 18, 26, _____, _____

(3) 27, 40, _____, _____

(4) 26, 40, _____, _____

4. Complete the sequence:

(a) 10, _____, 20, _____

1. 20, _____, 26, _____

2. 24, _____, 42, _____

3. 15, _____, 23, _____

$$\begin{array}{l} \overbrace{10 \quad \quad \quad 20}^{\rightarrow + \leftarrow} \\ 10, \quad \quad, 20 \quad \quad 10 + 20 = 30 \\ \\ 10, \underline{15}, 20 \quad \quad \frac{30}{2} = 15 \end{array}$$

8. (a) Write the algebraic expression of the sequence

10, 12, 14, ____, ____,

(b) Find the position of 58 in this sequence?

9. Is 2012 a term of the sequence 5, 9, 13,

Ans : First term $f = 5$; Common difference $d = 9 - 5 = 4$

$$\begin{array}{l|l} \frac{5}{4} \rightarrow 1. \text{ Remainder '1'} & \frac{2012}{4} \rightarrow 503 \text{ Remainder '0'} \\ \frac{9}{4} \rightarrow 2. \text{ Remainder '1'} & \therefore 2012 \text{ is not a term of this sequence} \\ \frac{13}{4} \rightarrow 3. \text{ Remainder '1'} & \end{array}$$

10. Consider the arithmetic sequence 12, 23, 34,

(a) What is the 10th term of this sequence?

(b) Is 165 a term of this sequence? Why?

11. Complete the sequence.

(a) ____, 7, ____, ____, 19

Ans: Common difference = $\frac{\text{Term difference}}{\text{Position difference}}$

$$2^{\text{nd}} \text{ Term} = 7$$

$$5^{\text{th}} \text{ Term} = 19$$

$$\therefore d = \frac{5^{\text{th}} \text{ Term} - 2^{\text{nd}} \text{ Term}}{5 - 2} = \frac{19 - 7}{5 - 2} = \frac{12}{3} = 4$$

$$d = 4$$

\therefore the sequence

$$2^{\text{nd}} \text{ Term} = 7$$

$$d = 4$$

$$\therefore 1^{\text{st}} \text{ term} = 7 - 4 = 3$$

$$3^{\text{rd}} \text{ term} = 7 + 4 = 11$$

$$4^{\text{th}} \text{ term} = 11 + 4 = 15$$

i.e, 3, 7, 11, 15, 19

12. Complete the sequence.

1. _____, 8, _____, _____, 23

2. _____, 5, _____, _____, 15

3. _____, 4, _____, _____, 22

13. Find the sum of first 5 odd numbers.

$$1 + 3 + 5 + 7 + 9$$

Sum of first 'n' odd numbers.

$$1 + 2 + 3 + 4 + \dots + n = n^2$$

$$1 + 3 = 2^2 = 4$$

$$1 + 3 + 5 = 3^2 = 9$$

$$1 + 3 + 5 + 7 = 4^2 = 16$$

$$1 + 3 + 5 + 7 + 9 = 5^2 = 25$$

$$1 + 3 + 5 + \dots + 15 = \underline{\hspace{2cm}}$$

$$1 + 3 + 5 + \dots + 21 = \underline{\hspace{2cm}}$$

14. Find the sum of terms of the series.

10, 12, 14, _____ 102.

$$t_1 = f = 10 \quad d = 2 \quad t_n = 102$$

$$\text{Number of terms 'n'} = \frac{t_n - t_1}{d} + 1$$

$$n = \frac{102 - 10}{2} + 1 = \frac{92}{2} + 1 = 46 + 1 = 47$$

$$\text{Sum} = \frac{47}{2} (\text{First term} + \text{Last term})$$

$$= \frac{47}{2} (10 + 102) = \frac{47}{2} (112) = \frac{47 \times 112}{2} = 282$$

===

15. Find the sum of terms:

1. 10, 15, 20, 25, _____ 125

2. 25, 50, 75, _____ 675

3. 2, 4, 6, 8, 10, _____ 1002

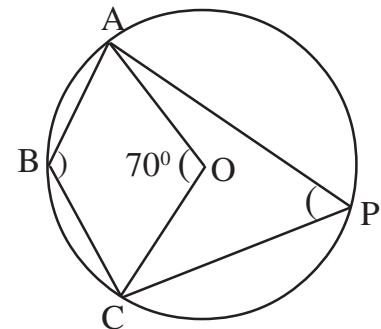
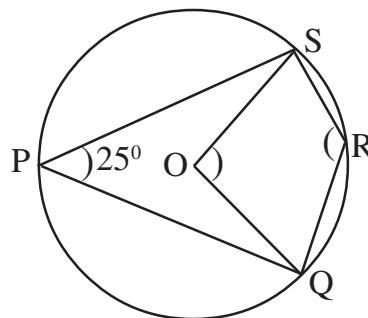
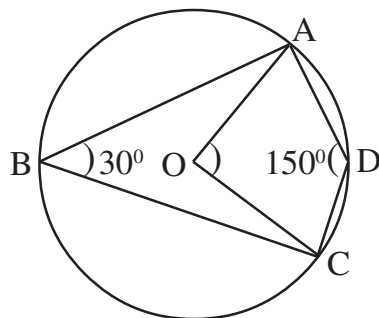
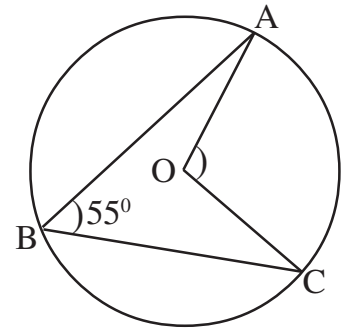
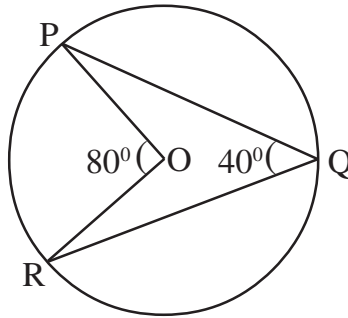
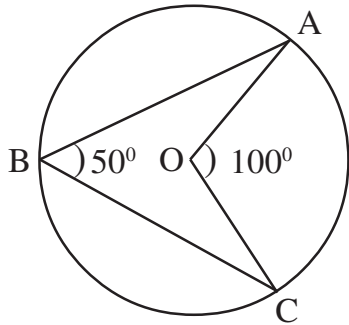
4. 10, 20, 30, _____, 110

1. Arithmetic Sequences

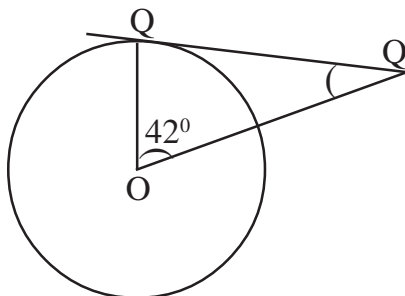
1. Consider the arithmetic sequence 5, 9, 13
 - (a) Write next two terms.
 - (b) Is 2012 a term of this sequence ? Why ?
2. Consider the arithmetic sequence 12, 23, 34,
 - (a) Write algebraic form of this sequence.
 - (b) Find 10th term ?
3. Write an arithmetic sequence with common difference 3. Find its 11th term.
4. Find the missing term of the given arithmetic sequences.
 - (a) 10, _____, 20, _____
 - (b) 12, _____, 20, _____
 - (c) 15, _____, _____, 30
 - (d) 6, _____, _____, 18
 - (e) _____, 6, _____, 16
 - (f) _____, 24, _____, 42
5. The algebraic form of an arithmetic sequence is $6n + 5$.
 - (a) Write the sequence.
 - (b) Find 15th term.
6. The algebraic form of an arithmetic sequences is $3n + 5$.
 - (a) Write the sequence
 - (b) Find 20th term
7. 8th term of an Arithmetic sequence is 53 and 15th term is 102.
 - (a) Find the common difference.
 - (b) Find 25th term of this sequence.

CIRCLES & TANGENTS

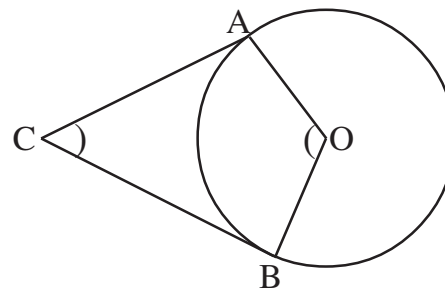
- Angle in a semicircle is right angled. (90°)
- Half central angle of an arc is equal to the angle made by that arc on the alternate arc.
- The opposite angles of a cyclic quadrilateral are supplementary. (Sum 180°)



- Tangents and radius are \perp r.
- Any two points on the circle and the point of intersection of the tangents through those points constitute a cyclic quadrilateral.



PQ is a tangent
Find $\angle P$ and $\angle Q$.



$\angle C = 60^\circ$
AC, BC are tangents.
Find $\angle A$, & $\angle B$.
Find $\angle AOB$.

CIRCLES - CONSTRUCTIONS

1. Draw a rectangle of sides 5 cm and 3 cm. Construct a square of the same area.
2. Draw a rectangle with sides 6 cm and 5 cm. Construct a square of the same area.
3. Draw a rectangle of sides 6 cm and 4 cm. Construct a square of the same area.

TANGENTS - CONSTRUCTIONS

1. Draw a circle of radius 4 cm, mark a point P on the circle. Draw a tangent through P.
2. Draw a circle of radius 4.5 cm. Mark a point P on the circle. Draw a tangent through the point P.
3. Draw a circle of radius 3 cm. Mark a point P 8 cm away from the its centre. Draw tangents from P to the circle. Measure the length of tangents.
4. Draw a circle of radiuis 4.5 cm. Mark a point P 8.5 an away from the centre. Draw tangents from P to the circle. Measure the length of tangents.

CIRCLES - CONSTRUCTIONS

1. Draw a circle with radius 5 cm. Draw a triangle with its vertices on the circle and having angles 35° , 72° , 73° .
2. Construct a triangle with two angles 50° and 65° and circumradius 3 cm. Write the length of the sides of the triangle.
3. Construct a square of area 12cm^2 .
4. Draw a rectangle of sides 5 cm and 3 cm. Construct a square of the same area.
5. The sides of a triangle are 4 cm, 7 cm and 8 cm. Draw it and construct a square of the same area.
6. Draw an isosceles triangle of hypotenuse 7 cm.
7. Draw a rectangle of length 5 cm and breadth 4 cm. Construct a new rectangle having the same area and one of its sides as 6 cm.

TANGENTS - CONSTRUCTIONS

1. The radius of a circle touching all sides of an equilateral triangle is 3 cm. Draw this triangle.
2. Radius of an incircle to a triangle is 3 cm. Two angles of this triangle are 55° and 63° . Draw this triangle.
3. Draw a triangle of sides 6 cm and 8 cm, angle between them is 70° . And draw its incircle and measure its in radius.
4. Draw an equilateral triangle with sides 4 cm. Construct its incircle and measure the radius.
5. Draw a circle of radius 3 cm. Mark a point P, 8 cm away from its centre. Draw tangents from P to the circle. Measure the length of tangents.
6. Draw a triangle of sides 6 cm, 7 cm, and 8 cm. Draw a circle which touches all sides of the triangle and measure its radius.

COORDINATES, GEOMETRY AND ALGEBRA

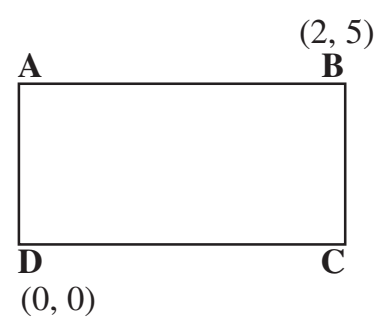
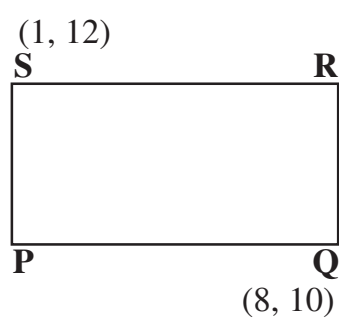
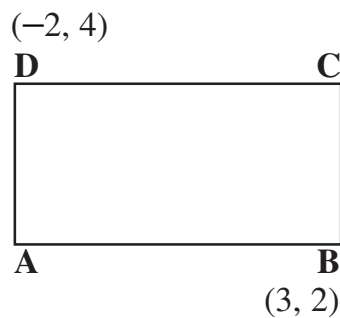
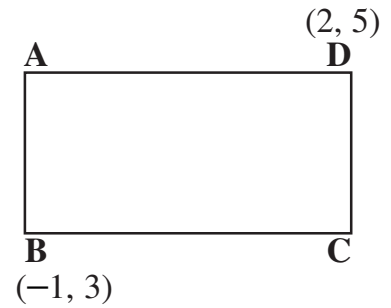
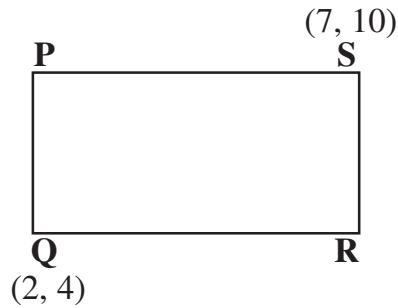
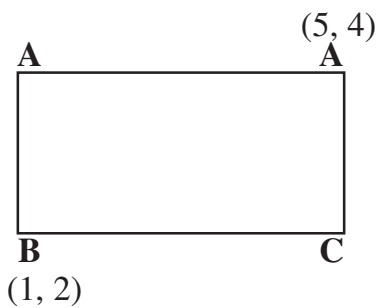
1. Draw X and Y axis. Mark the points given below.

(a) $(1, 2)$, $(3, 4)$, $(2, 1)$, $(1, 1)$

(b) $(0, 2)$, $(3, 1)$, $(-1, 2)$, $(3, 0)$

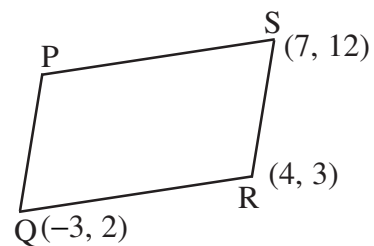
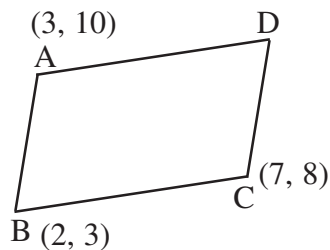
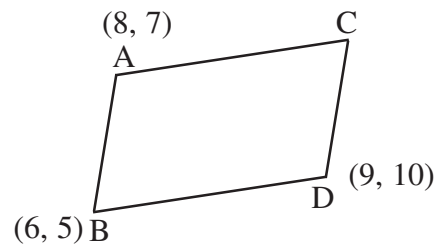
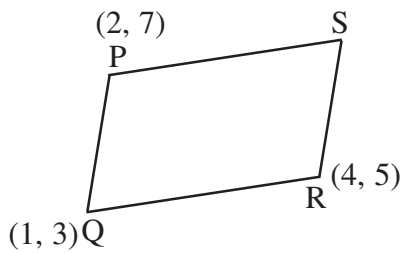
(c) $(1, 3)$, $(0, 4)$, $(4, 0)$, $(-2, 3)$

2. Two opposite vertices are given. Find co-ordinates of other two vertices.



3. Co-ordinates of two opposite vertices of a rectangle are given as $(1, 2)$ and $(3, 4)$. Find co-ordinates of other two vertices.

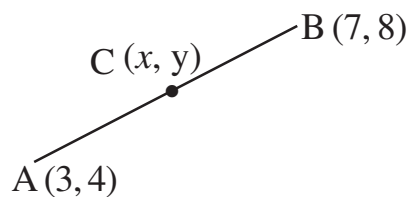
1. Find coordinates of the fourth vertex of the parallelogram.



2. A (2, 3), B (7, 4), D (3, 8) are the co-ordinates of vertices of a parallelogram ABCD. Find co-ordinates of vertex C.

Mid Point

1. Find the mid point of the line joining the points A (3, 4), B (7, 8)



$$\begin{aligned} \text{Midpoint} &= \left(\frac{x_1 + x_2}{2}, \frac{y_1 + y_2}{2} \right) \Rightarrow \left(\frac{3 + 7}{2}, \frac{4 + 8}{2} \right) \Rightarrow \left(\frac{10}{2}, \frac{12}{2} \right) \\ &= (5, 6) \end{aligned}$$

2. Find coordinates of the midpoints.

- (a) A (5, 7), B (8, 10) (b) P (1, 2), Q (9, 12)
 (c) A (2, 4), B (10, 12) (d) A (0, 2), B (8, 10)

Slope

1. Find slope of the line joining the points A (1, 2), B (4, 7).

A (1, 2) B (4, 7)

$$\text{Slope} = \frac{y_2 - y_1}{x_2 - x_1} \longrightarrow \left(\frac{\text{y difference}}{\text{x difference}} \right)$$

$$\text{Slope} = \frac{7 - 2}{4 - 1} = \frac{5}{3}$$

2. Find slope

(a) A (2, 3), B (2, 8)

(b) P (1, 4), Q (5, 6)

(c) A (0, 2), B (7, 9)

Distance formula

1. Find distance between the points A (1, 2), B (3, 7).

$$\text{distance} = \sqrt{(x_2 - x_1)^2 + (y_2 - y_1)^2}$$

$$\begin{aligned} \text{A (1, 2), B (3, 7)} \quad \text{distance} &= \sqrt{(3 - 1)^2 + (7 - 2)^2} \\ &= \sqrt{2^2 + 5^2} \\ &= \sqrt{4 + 25} = \sqrt{29} \end{aligned}$$

2. Find distance (length)

(a) A (1, 4), B (3, 8)

(b) P (2, 3), Q (10, 12)

(c) O (0, 0), P (7, 8)

(d) P (-2, -1), (1, 4)

3. The three vertices of a parallelogram PQRS are P(-3, 2), Q(2, 7), S(1, 9). Find the length of the diagonal PR.

STATISTICS

1. Find mean and median.

- (a) 135, 120, 148, 153, 124, 122, 150, 147
- (b) 38, 43, 24, 42, 33, 46, 29
- (c) 34, 44, 32, 41, 38, 46, 45, 40
- (d) 37.5, 47.5, 30, 35, 50, 32.5, 42.5, 45

2. Find median

(a)

Wage	No.
5000	3
6000	7
7000	8
8000	5
9000	5
10000	4
11000	3

(b)

Age	No.
12	5
13	8
14	7
15	10
16	6
17	4

(c)

Wage	No.
225	4
250	7
270	9
300	5
350	3
400	2

(d)

Wage	No.
0 - 50	3
50 - 100	5
100 - 150	14
150 - 200	12
200 - 250	6
250 - 300	3

(e)

Mark	No.
0 - 10	5
10 - 20	8
20 - 30	10
30 - 40	7
40 - 50	5

(f)

Wage	No.
200 - 300	3
300 - 400	7
400 - 500	10
500 - 600	8
600 - 700	4
700 - 800	3

POLYNOMIALS

1. Find the remainder when $5x^2 + 7x + 1$ is divided by $(x - 2)$.

$$P(x) = 5x^2 + 7x + 1$$

$$(x - 2)$$

$$P(2) = 5(2)^2 + 7(2) + 1 = 5 \times 4 + 7 \times 2 + 1 = 20 + 14 + 1$$

$$P(2) = 35$$

==

2. Find remainder when $P(x) = 3x^2 + 4x + 2$ is divided by $(x + 1)$.

$$P(x) = 3x^2 + 4x + 2$$

$$(x + 1)$$

$$P(-1) = 3(-1)^2 + 4(-1) + 2 = 3 \times 1 + 4(-1) + 2$$

$$P(-1) = 3 - 4 + 2 = 1$$

3. Check whether $(x - 1)$ is a factor of $x^3 - 3x^2 + 7x - 1$.

$$P(x) = x^3 - 3x^2 + 7x - 1$$

$$(x - 1)$$

$$P(1) = (1)^3 - 3(1)^2 + 7(1) - 1 = 1 - 3 + 7 - 1 = 4$$

$$P(1) = 4$$

$(x - 1)$ not a factor

4. $(x - 2)$ is a factor of $Kx^2 - 4x + 1$. Find the value of K ?

$$(x - 2) \quad P(x) = Kx^2 - 4x + 1 \quad (x - 2) \text{ is factor} \quad \therefore P(2) = 0$$

$$P(2) = K(2)^2 - 4(2) + 1 = 0$$

$$P(2) = 4K - 8 + 1 = 0$$

$$= 4K - 7 = 0$$

$$4K = 7, \quad K = \frac{7}{4}$$