



Silent Bells




ഫസ്റ്റ് ബെൽ - അനുബന്ധ പഠനസഹായകസാമഗ്രി

Class :10 Subject: SOCIAL SCIENCE Date: 19.11.20 Worksheet No 33 Class link:



UNIT&LO: TERRAIN ANALYSIS THROUGH MAPS

1. What is the importance of latitude and longitude in a map?



2. Analyse the figures and find out the salient features of Eastings and Northings

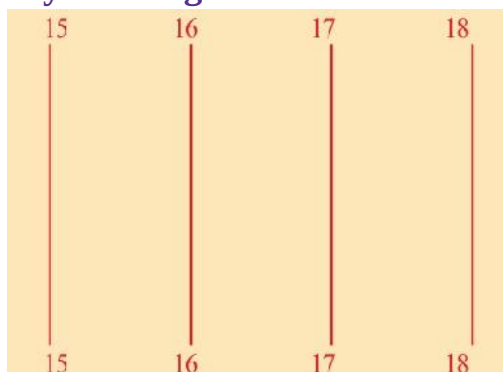


Fig- 1




Fig- 2

Figure 1 NAME.....

- ◆ These are lines drawn in thedirection
- ◆ Their value increases towards
- ◆

Figure 2 NAME.....

- ◆ These are lines drawn in thedirection
- ◆ Their value increases towards
- ◆

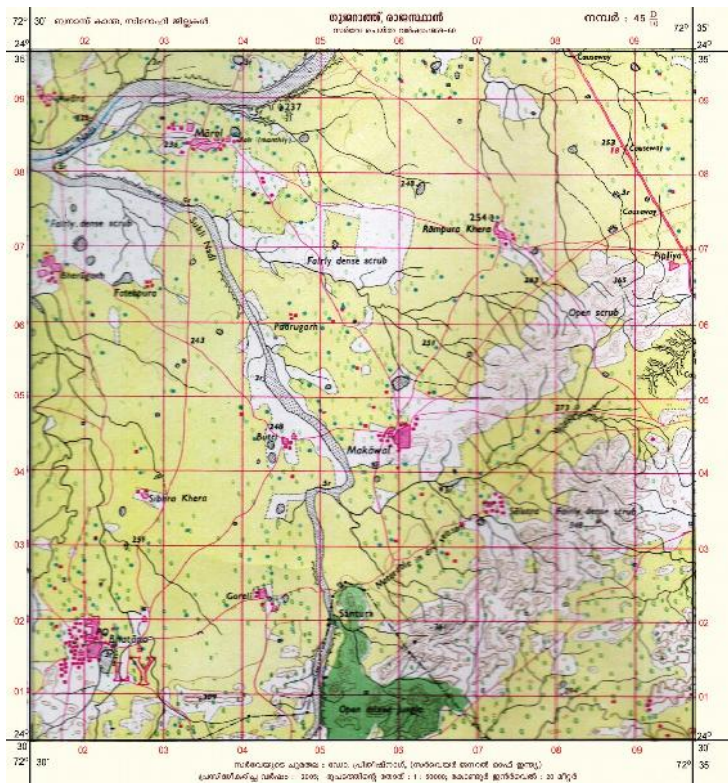


Silent Bells



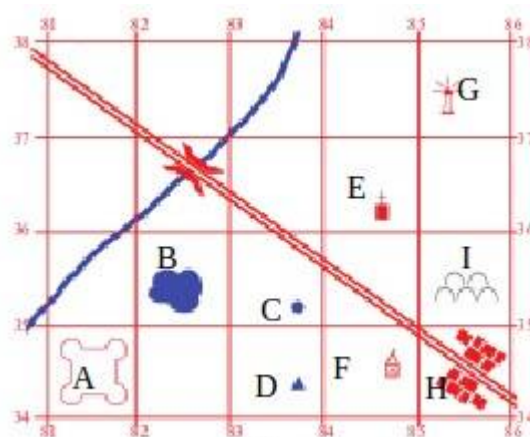
ഫസ്റ്റ് ബെൽ - അനുബന്ധ പഠനസഹായകസാമഗ്രി

3. Find Eastings Northings records on the given toposheet and write two examples of each.



4. Write a short note about reference grid?

5. Observe the given model grid and complete the table


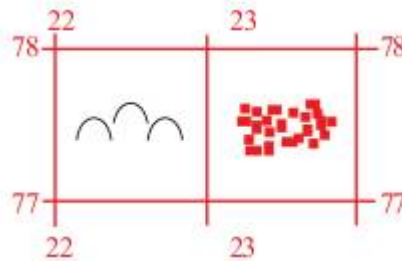


Silent Bells

ഫസ്റ്റ് ബെൽ - അനുബന്ധ പഠനസഹായകസാമഗ്രി

Name of the geographic features	The location using the 4-figure grid reference or 6-figure grid reference
A	8134
B	
C Well	
D	
E	
F Temple	
G	
H	8534
I	

6. Find out the location of settlements and graveyard in the given grid, using the 4-figure grid reference method.



7. Find out the location of spring, mosque, railway station, police station, and well in the given grid, using the 6-figure grid reference method.

