

SECOND TERM EVALUATION 2019-20

Health and Physical Education, Art Education, Work Education
Class V

Time 2 hours

Instructions

1. There are three sections: Health & Physical Education, Art Education and Work Education.
2. Each section carries 15 score.
3. First 15 minutes is cool off time.
4. Answer each section in each separate answer sheet. Don't forget to write your Name, Subject, Class, Division and Roll number in all the sheets.

HEALTH AND PHYSICAL EDUCATION**Answer any four**

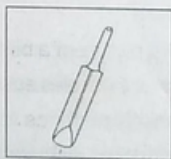
1. The instrument used for measuring height scientifically.
(Weighing machine, Stadiometer, Stopwatch, Stethoscope)
2. The ability of muscles to perform activities continuously without fatigue.
(Muscular Endurance, Flexibility, Agility, Strength)
3. Identify the full form of BMI.
(Bone Mass Index, Body Muscle Index, Body Mass Index, Body Mass Indicator)
4. An injury caused to tissues when a heavy object hits on the body.
(Burns, Wound, Fracture, Contusion)
5. An activity that helps to increase physical fitness.
(Walk, Sleep, Watching TV, Playing chess)

Answer any four

6. Prepare a note on kids athletics.
7. Write the names of the sports equipment given in the picture.



(a)



(b)

- Which are the cooling down exercises ?
- What are the things to be kept in mind when you have a burn?
- Name any four things that should be included in the First Aid box.

Answer any one

- Write down the characteristics of 'safe play area'.
- Your friend got injured on his knee while playing. What First Aid will you give to him?

ART EDUCATION

Answer any four

- In the Youth festival, I got the subject "My Garden" for drawing. I drew butterflies and my picture. What other important things should I draw ?
(Plants and flowers, Father, Mother, House)
- In the model given by the teacher for drawing, a pipe of 4 inch diameter was also included. Which geometrical shape does it belong to?
(Rectangular prism, Triangular prism, Cylinder, Cube)
- Which among the following is not a string instrument?
(Veena, Violin, Harmonium, Sitar)
- Which among the following is a Western musical instrument?
(Veena, Mrudangam, Mukharsanku, Violin)
- The dance form in which the bride sits in the middle and the maids dance on her sides.
(Thiruvathirakkali, Margamkali, Oppana, Poorakkali)
- Who is the King in the "Jungle Stories"?
(Leopard, Lion, Bison, Fox)

Answer any one

- Write any two methods used for communication before the development of language.
- Write any two situations in which you are compelled to use an umbrella.

Answer any two

- Draw the picture of a bird using circle, triangle and rectangle.
- Write three examples each for "Wind instruments" and "Percussion instruments"
- Write any three things to be kept in mind while dancing in a group.
- Write any three sentences that a mother would say to her child, when the child refuses to eat his food.

Answer any one

13. Draw your picture on your way to school for 'Pravesanolsavam' holding your mother's hand with a bag and a dotted umbrella. Sketch using a pen or a pencil.
14. What are the features of "wind instruments"?

WORK EDUCATION

Answer any three

1. Observe the pictures and identify the household instruments



Picture - A



Picture - B



Picture - C



Picture - D

2. Which method is not used for beautifying clothes ?
(Fabric painting, Tie and dye, Vegetable printing, Enamel painting)
3. Observe the pictures and identify the decorative item made using paper.



Picture - A



Picture - B



Picture - C

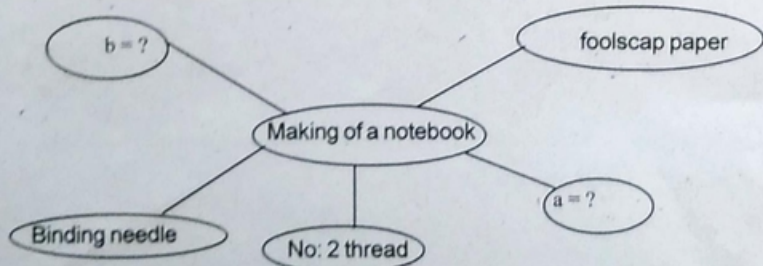


Picture - D

4. Pick out the correct length and width of an A4 size paper.
(35 x 22 cm, 30 x 21 cm, 32 x 18 cm, 31 x 21 cm)

Answer any four

5. Complete the word web related to the making of a notebook.

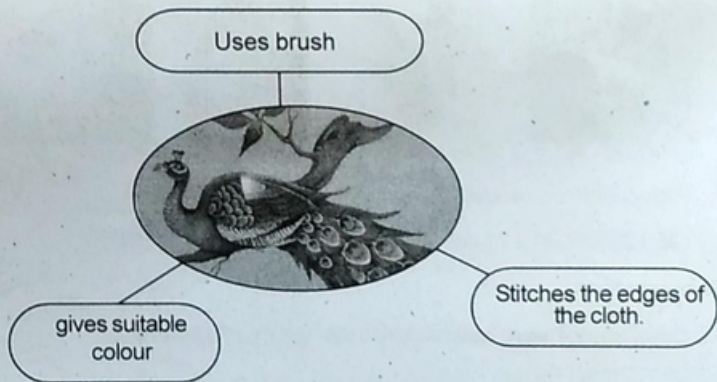


- Name the raw materials used for the foundation of a house building.
- Name any two electrical energy conservation methods.
- Explain a simple experiment to show the movement of sound waves using a paper glass and thread.
- Read the newspaper report given. Which climatic disaster is mentioned in it.

The expected rainfall in Kerala during the monsoon from June 1 to September 30 was 2000 ml. No district had such rainfall in these days. The ground water level went down due to this. The monsoon was not enough to bring up the ground water level. The authorities stated that the ground water level is less than the average of last ten years.

Answer any one

- Observe the word web. Identify the activity. Write the procedure of this activity.



- Explain some activities you can do in your classroom and surroundings, related to "Haritha Vidyalayam Project".