



**SAMAGRA SHIKSHA, KERALA**  
**ANNUAL EVALUATION 2018-19**  
**PHYSICS**

**E 906 Ph**

Standard: IX

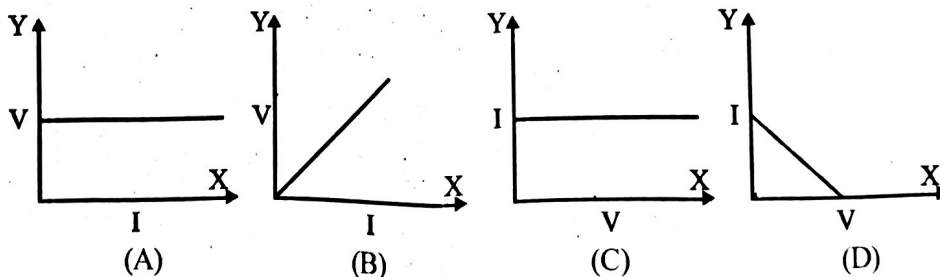
Time : 1½ Hour  
 Total Score : 40

**Instructions**

- First 15 minutes is given as cool off time. This time is to be spent for reading and understanding the questions.
- Answer the questions based on instructions.
- Answer the questions according to score and time

Answer any **FOUR** questions from 1 to 5. Each question carries 1 score. (4 x 1 = 4)

1. Identify the relation between the first pair and complete the second. (1)  
 A floating ship : Archimedes principle  
 An excavator : .....
2. If 0.8 coulomb of charge flows through a conductor in 2 second the current will be (1)  
 (0.2 A, 2 A, 0.4 A, 4 A)
3. Which among the following can be the possible value of 'g' at the poles of the earth (1)  
 (9.78 m/s<sup>2</sup>, 9.83 m/s<sup>2</sup>, 0 m/s<sup>2</sup>, 9.6 m/s<sup>2</sup>)
4. Name a star which is seen in orange colour ..... (1)
5. From the following, which graph is related to Ohm's law? (1)

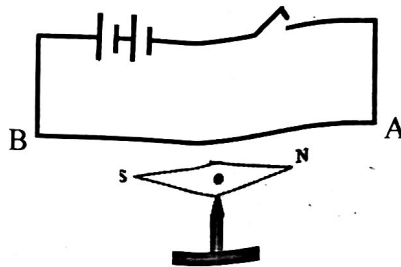


Answer any **FOUR** questions from 6 to 10. Each question carries 2 score. (4 x 2 = 8)

6. The symbol of a device which regulates the current in a circuit is (1)
  - a) Name the device. (1)
  - b) Which principle is used to design this device? (1)
7. 'Orion' is a constellation used to find out direction. (1)
  - a) Name any other purposes for which our ancestors observed the stars. (1)
  - b) Write the name of another constellation that was observed for finding the direction. (1)

8. Kilogram weight (kgwt) is a unit of weight. (1)
- a) Express the value of 1 kgwt in newton. (1)
- b) Which device is used to measure weight? (1)

9. A magnetic needle is arranged below the conductor and parallel to it as shown.



- a) In which direction does the north pole of this magnetic needle move? (1)  
(Clockwise / Anti clockwise)
- b) Write the reason for the deflection of magnetic needle? (1)
10. Complete the table.

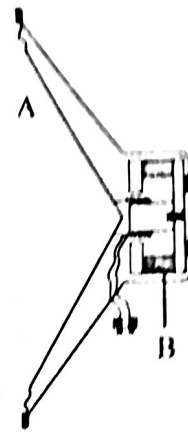
Voltage (V)	Current I (A)	Resistance R ( $\Omega$ )
8	(a) .....	4
12	3	(b) .....

- i) Find the values of a and b? (1)
- ii) State the law helped you in completing the table. (1)

**Answer any FOUR questions from 11 to 15. Each question carries 3 score. (4 x 3 = 12)**

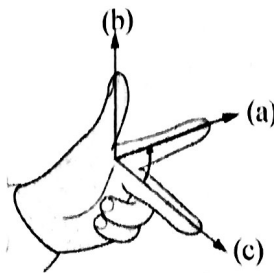
11. A stone of mass 100 g is dropped from the top of a tower. It takes 2 s to reach the ground. ( $g = 10 \text{ m/s}^2$ )
- a) Calculate the height of the tower. (1)
- b) Evaluate the potential energy possessed by the stone when it is at the top of the tower? (1)
- c) Evaluate the kinetic energy of the stone when it just touches the ground? (1)
12. The resistance of a copper wire and an aluminium wire of same length and thickness are different.
- a) Name the property of the substances responsible for this difference. (1)
- b) Define this property. (1)
- c) Select the factors affecting this property from the following. (1)  
(Length, Area of cross section, Temperature)
13. Stars have birth and death.
- a) From where do stars born? (1)
- b) Energy is produced in stars by nuclear fusion. Explain how the conditions for this energy production is achieved? (2)

14. The figure shows the pictorial depiction of a loud speaker.



- a) Identify the parts A and B. (1)  
 A..... B .....
- b) What energy transformation is taking place in this device? (1)
- c) Name the basic principle of its working. (1)

15. The picture shows Fleming's left hand rule. Choose appropriate terms from the box that is represented by a, b and c. (3)



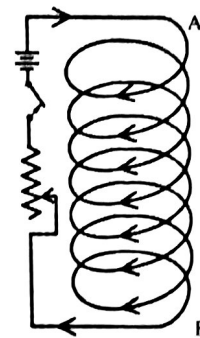
Force, Current, Resistance, Magnetic field

Answer any **FOUR** questions from 16 to 20. Each question carries 4 score. (4 x 4 = 16)

16. A lorry of mass 1500 kg moves with a velocity of 10 m/s. By applying brakes it is brought to rest in 5 seconds.

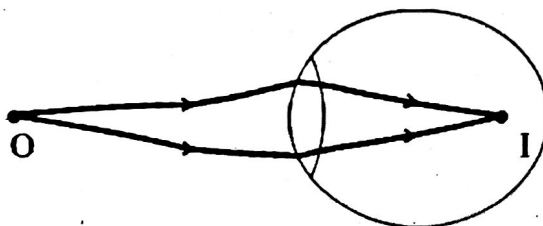
- a) What is the initial momentum of the lorry? (1)
- b) What is the final momentum? (1)
- c) What is the rate of change of momentum? (1)
- d) 'Rate of change of momentum depends on the applied force'. Name the law related to this statement. (1)

17. Observe the figure given below.

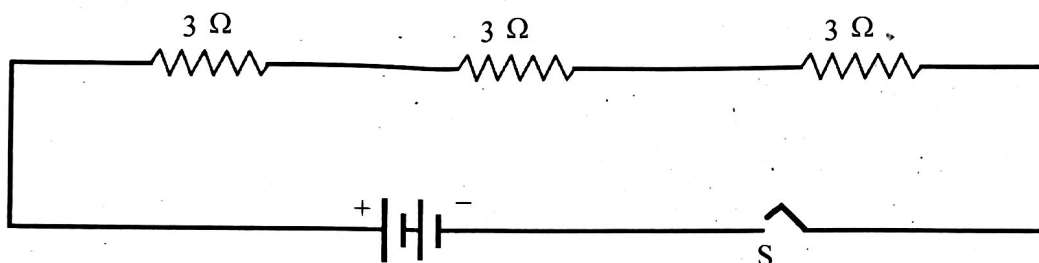


- a) When a current is passed through the circuit in a direction as shown. Which polarity is developed at A? (1)
- b) Write down two methods to increase the strength of the magnetic field of a solenoid carrying a current. (2)
- c) Name a device that works using the magnetic effect of electric current? (1)

18. Given below is the ray diagram of image formation in the eye of a child when he views a far off object.



- Name this defect of eye. (1)
  - What would be the reasons for this defect of eye? (2)
  - Suggest a method to rectify this. (1)
19. Observe the figure.



- Calculate the effective resistance in the above circuit. (1)
  - Draw the diagram by rearranging the circuit so as to get an effective resistance of one ohm. (1)
  - From the given statements, choose those suitable for the circuit you have drawn. (2)
    - The current through each resistor is different.
    - The potential difference across each resistor is different.
    - The same current flows through all the resistors.
    - The potential difference across each resistor is the same.
20. Match the items in columns A, B and C. (4)

A	B	C
Geosynchronous satellite	Surface of the sun	Energy production
Main sequence star	24 hours	Thiruvathira
Sun spot	13 - 14 days	Strong magnetic field
Njattuvela	H is converted to He	Communication